

C11 - 6.1 - Alkane WS

Draw the following alkanes Full and Condensed Structure.

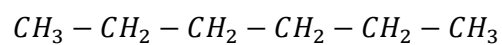
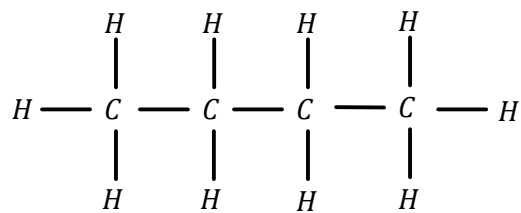
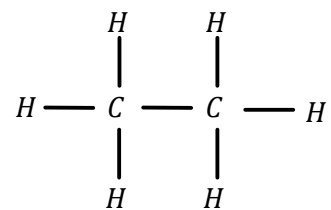
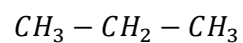
Propane:

Butane:

Octane:

Methane:

Name the following alkanes.



C11 - 6.1 - Alkyl WS

Draw the following Ethyl Condensed Structure.

3 - methylpentane

2 - ethylbutane

2,3 dimethylbutane

2,3,4 - trimethylheptane

2,- Methyl - 3 ethylhexane *trick

Name the following Alkyls.

