

C11 - 6.2 - Cycloalkanes WS

Draw the following Cycloalkanes Condensed Structure.

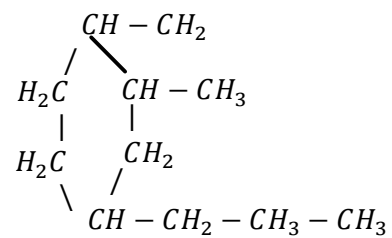
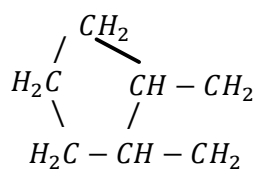
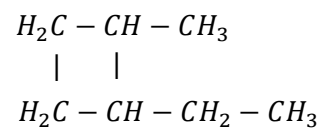
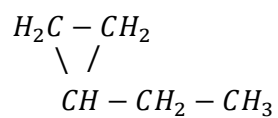
Cyclobutane

Cyclopropane

Diethyl Cyclopropane

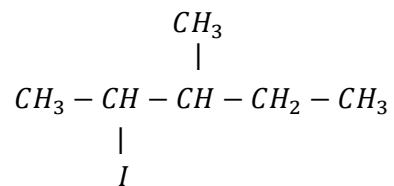
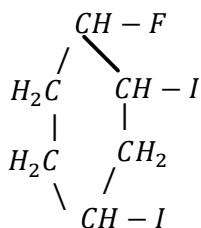
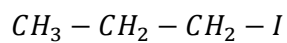
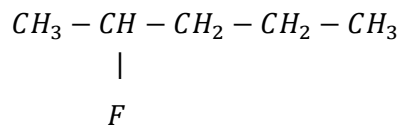
Ethyl 2 - Methyl Cyclobutane

Name the following Cycloalkanes.



C11 - 6.2 - Alkyl Halides WS

Draw the following alkyl halides Condensed Structure.



Name the following alkyl halides.

2 - Chloropentane

2,3 - diiodohexane

2 - Fluoro - 3,4,5 - Trichlorobutane

1 - Iodo - 2,3 dichlorocyclobutane