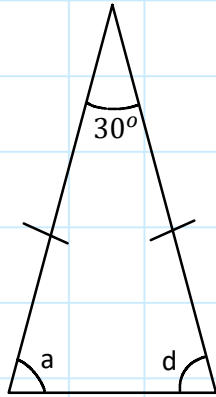
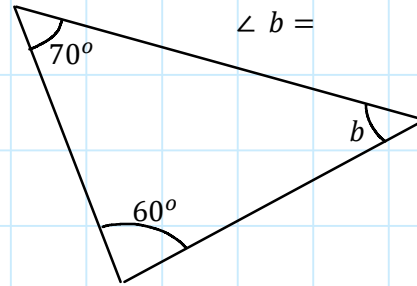
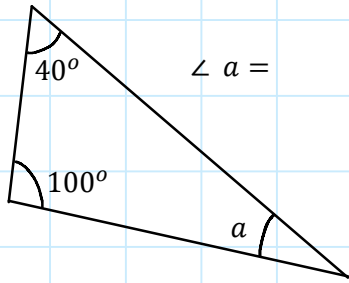
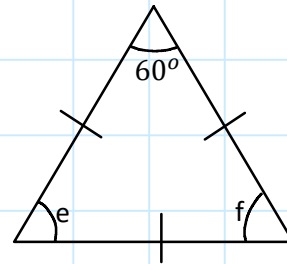


M9 - 10.0 - Angles in a Triangle HW



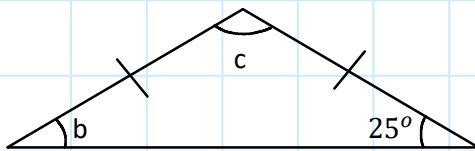
$\angle a =$

$\angle d =$



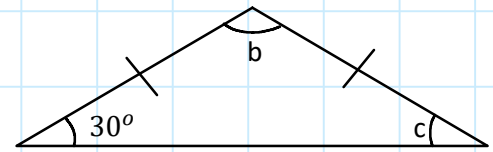
$\angle e =$

$\angle f =$



$\angle c =$

$\angle b =$



$\angle c =$

$\angle b =$

