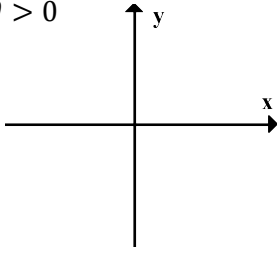


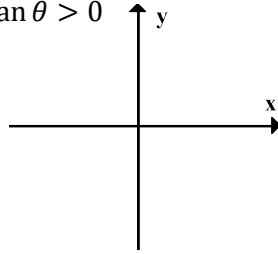
C11 - 2.2 - ASTC +/− HW

Draw 2 triangles in the quadrants for the following statements

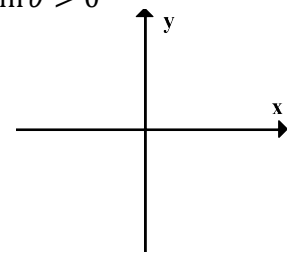
$$\cos \theta > 0$$



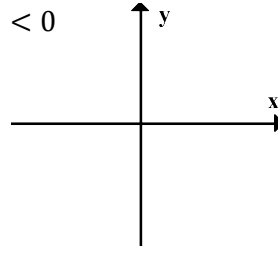
$$\tan \theta > 0$$



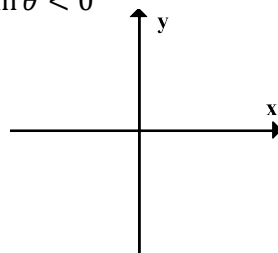
$$\sin \theta > 0$$



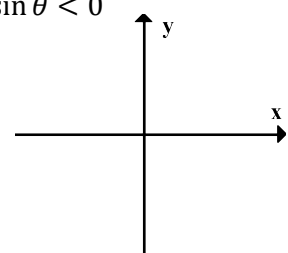
$$\cos \theta < 0$$



$$\tan \theta < 0$$

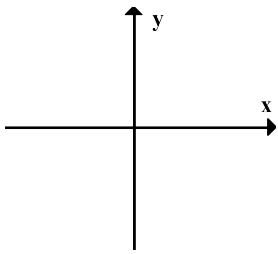


$$\sin \theta < 0$$

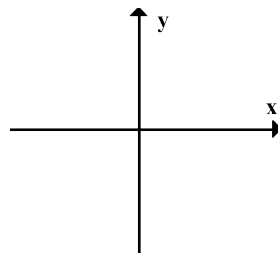


Draw a triangle in the quadrant for following statements

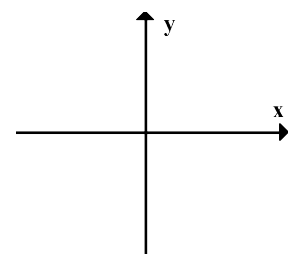
$$\cos \theta > 0 \text{ and } \sin \theta < 0$$



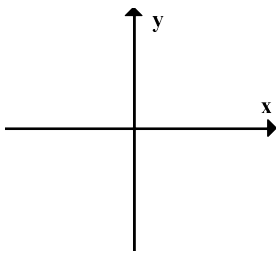
$$\cos \theta < 0 \text{ and } \tan \theta > 0$$



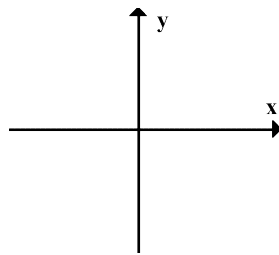
$$\tan \theta > 0 \text{ and } \sin \theta > 0$$



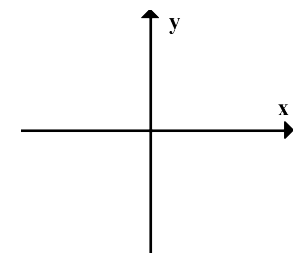
$$\cos \theta < 0 \text{ and } \sin \theta < 0$$



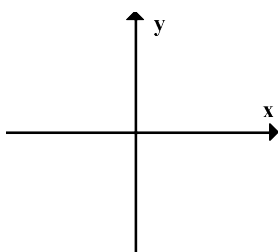
$$\cos \theta < 0 \text{ and } \tan \theta < 0$$



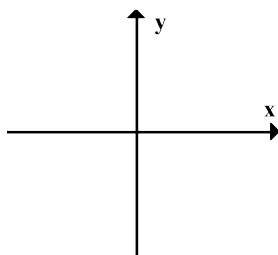
$$\tan \theta < 0 \text{ and } \sin \theta > 0$$



$$\cos \theta < 0 \text{ and } \sin \theta > 0$$



$$\cos \theta > 0 \text{ and } \tan \theta < 0$$



$$\tan \theta < 0 \text{ and } \sin \theta < 0$$

