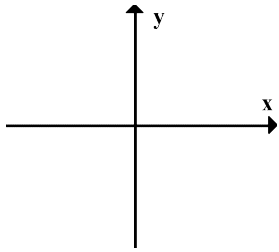


C11 - 2.3 - Trig Ratios HW

SOH CAH TOA

Find $\sin x$, $\cos x$, and $\tan x$ for the following points. And θ_{stp}

(4,3)



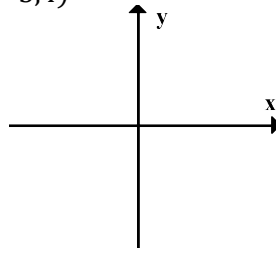
$$\sin x =$$

$$\cos x =$$

$$\tan x =$$

$$\theta_{stp} =$$

(-3,4)



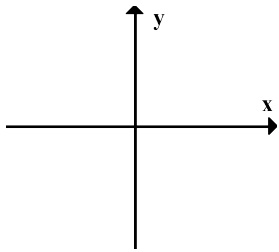
$$\sin x =$$

$$\cos x =$$

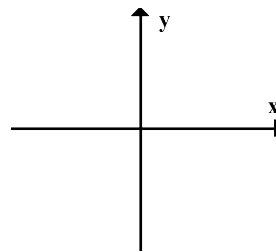
$$\tan x =$$

$$\theta_{stp} =$$

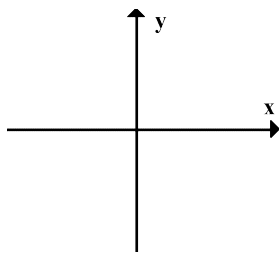
(-3,-4)



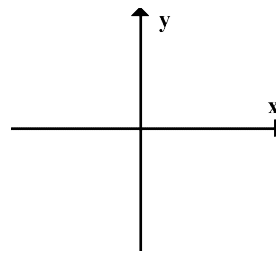
(-5,12)



(6,8)



(8,-6)



(3,4)

(2, $\sqrt{5}$)

(5,12)

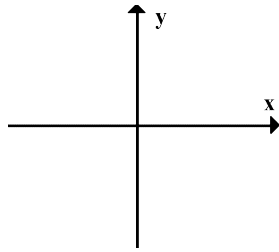
(5, $4\sqrt{6}$)

C11 - 2.3 - Trig Ratios HW

SOH CAH TOA

Find $\sin x$, $\cos x$, and $\tan x$ for the following points. And θ_{stp}

$(-2, 5)$



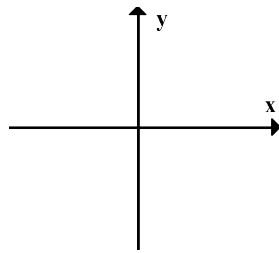
$$\sin x =$$

$$\cos x =$$

$$\tan x =$$

$$\theta_{stp} =$$

$(3, -3)$



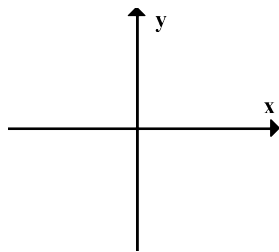
$$\sin x =$$

$$\cos x =$$

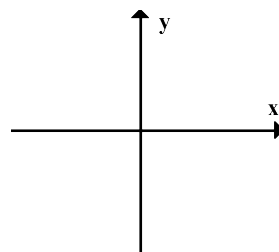
$$\tan x =$$

$$\theta_{stp} =$$

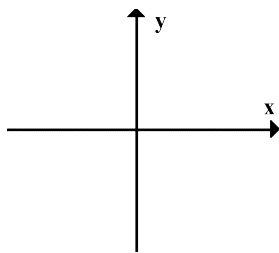
$(-5, -7)$



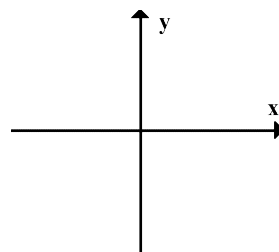
$(-3, 8)$



$(4, 2)$



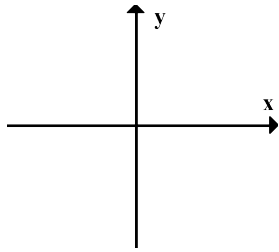
$(7, -1)$



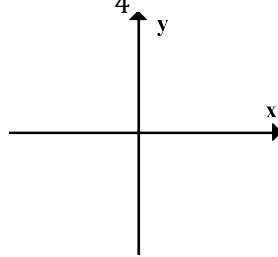
C11 - 2.3 - Trig Ratio Equations HW

Solve for x , $0 \leq x < 360$, answer should say $x =$

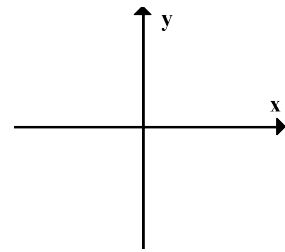
$$\sin x = 0.6$$



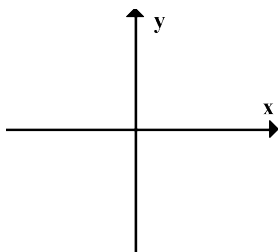
$$\cos x = -\frac{1}{4}$$



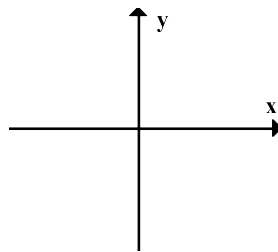
$$\cos x = 0.45$$



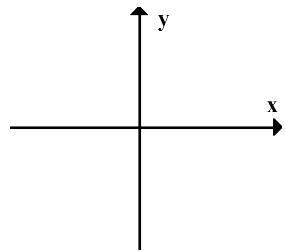
$$\tan x = \frac{4}{5}$$



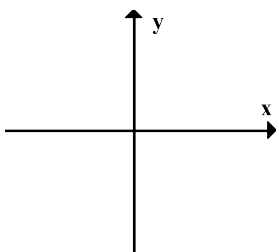
$$\tan x = \frac{1}{5}$$



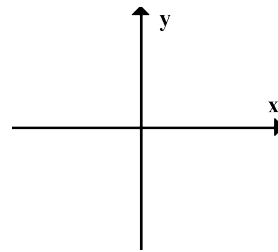
$$\sin x = \frac{1}{3}$$



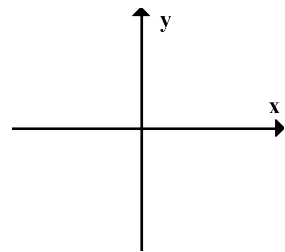
$$\sin x = -0.1$$



$$\cos x = -0.5$$



$$\tan x = -0.866$$



$$\sin x = -0.2$$

$$\tan x = 0.866$$

$$\cos x = 2$$

$$\sin x = 0.5$$

$$\tan x = -1$$