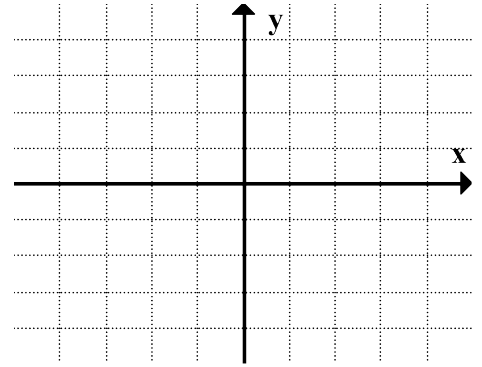


C11 - 3.4 - Find Equation in Vertex Form HW

Find equation in Vertex Form and graph.

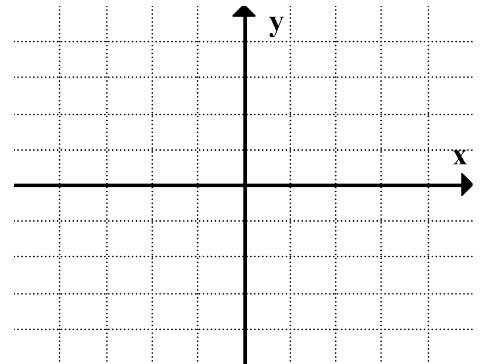
Vertex: $(1, -4)$

Point: $(2, -3)$



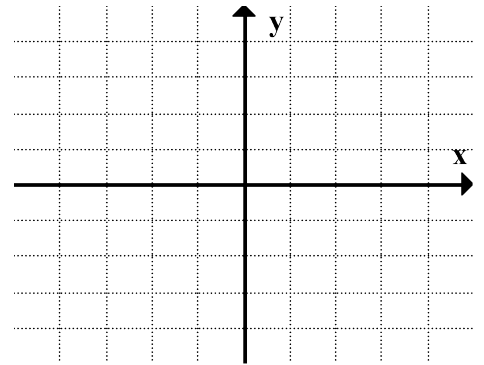
Vertex: $(-1, -2)$

Point: $(1, 2)$



Vertex: $(3, -4)$

Point: $(2, -2)$



Vertex: $(2, 1)$

y -int = -3

