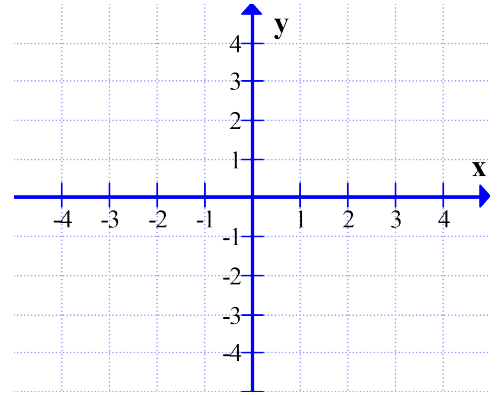


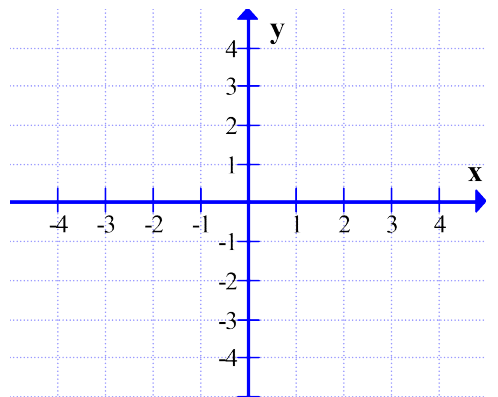
C12 - 3.3 - Factoring WS

Factor and state the x and y-intercepts and draw a graph

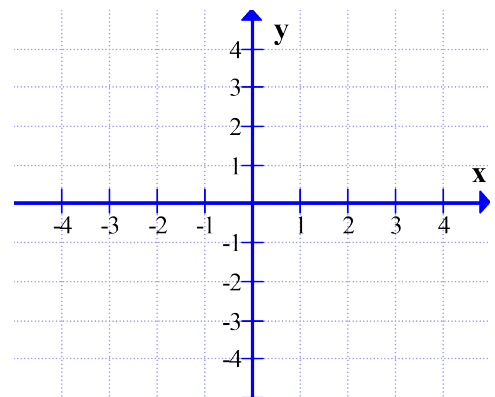
$$x^2 - 4x + 3$$



$$x^3 - 2x^2 - 5x + 6$$



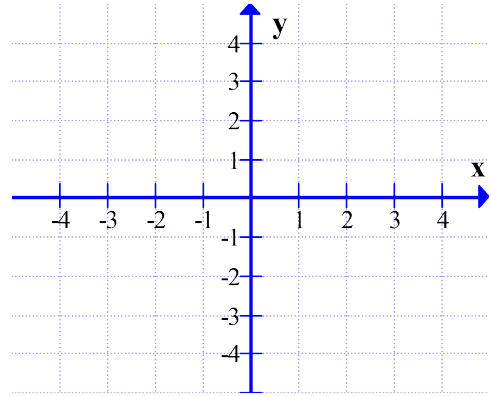
$$-x^3 - 2x^2 + 5x + 6$$



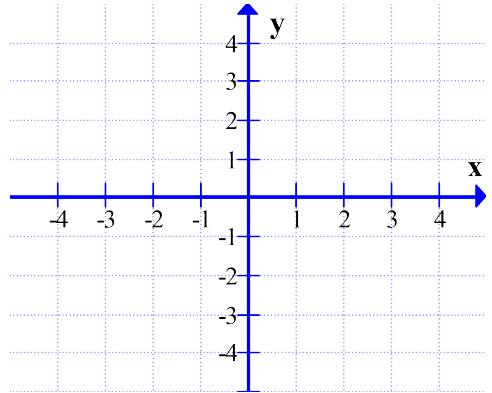
C12 - 3.3 - Factoring WS

Factor and state the x and y-intercepts and draw a graph

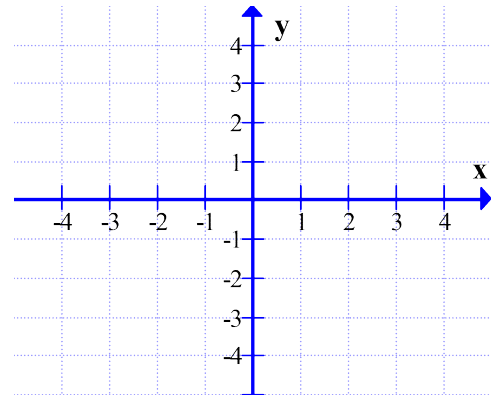
$$x^3 + 2x^2 - 4x - 8$$



$$x^4 - 2x^3 + 2x - 1$$



$$x^3 - 3x + 2$$



$$-x^3 + 3x^2$$

