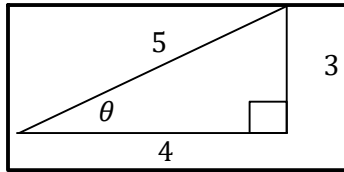


C12 - 4.3 - Find Ratio/Type in Calc Notes



Degrees are for children, unless you are taking physics.

$\sin\theta = \frac{O}{H}$ $\csc\theta = \frac{H}{O}$ $\sin\theta = \frac{3}{5}$ $\csc\theta = \frac{5}{3}$ The first letters switch s<->c	$\cos\theta = \frac{A}{H}$ $\sec\theta = \frac{H}{A}$ $\cos\theta = \frac{4}{5}$ $\sec\theta = \frac{5}{4}$ The first letters switch c<->s No one would do this! $\sec\theta = \frac{5}{4}$	$\sec\theta = \frac{1}{\cos\theta}$ $\sec\theta = \frac{1}{\left(\frac{4}{5}\right)}$ $\sec\theta = 1 \times \frac{5}{4}$ $\sec\theta = \frac{5}{4}$	$\tan\theta = \frac{O}{A}$ $\cot\theta = \frac{A}{O}$ $\tan\theta = \frac{3}{4}$ $\cot\theta = \frac{4}{3}$ The ones with the t's
--	--	---	---

Type in Calculator (Degrees or Radians)

$\sin 25^\circ = 0.42$ $\cos 180^\circ = -1$ $\sin 30^\circ = \frac{1}{2}$ $\tan(-980^\circ) = -5.67$ $\sin 2.5 = 0.60$ $\cos \frac{\pi}{3} = \frac{1}{2}$ $\tan(5\pi) = 0$ $\cos \pi = -1$	$\csc 140^\circ =$ $\csc\theta = \frac{1}{\sin\theta}$ $\csc 140^\circ = \frac{1}{\sin 140^\circ}$ $\csc 140^\circ = -1.56$ $\csc 3.4 =$ $\csc\theta = \frac{1}{\sin\theta}$ $\csc 3.4 = \frac{1}{\sin 3.4}$ $\csc 3.4 = -3.91$	$\sec 65^\circ =$ $\sec\theta = \frac{1}{\cos\theta}$ $\sec 65^\circ = \frac{1}{\cos 65^\circ}$ $\sec\theta = 2.37$ $\sec\left(\frac{3}{5}\right) =$ $\sec\theta = \frac{1}{\cos\theta}$ $\sec\left(\frac{3}{5}\right) = \frac{1}{\cos\left(\frac{3}{5}\right)}$ $\sec\left(\frac{3}{5}\right) = 1.21$	$\cot 25^\circ =$ $\cot\theta = \frac{1}{\tan\theta}$ $\cot 25^\circ = \frac{1}{\tan 25^\circ}$ $\cot 25^\circ = 2.14$ $\cot 250 =$ $\cot\theta = \frac{1}{\tan\theta}$ $\cot 250 = \frac{1}{\tan 250}$ $\cot 250 = -0.25$
--	--	---	---

Find θ in Degrees

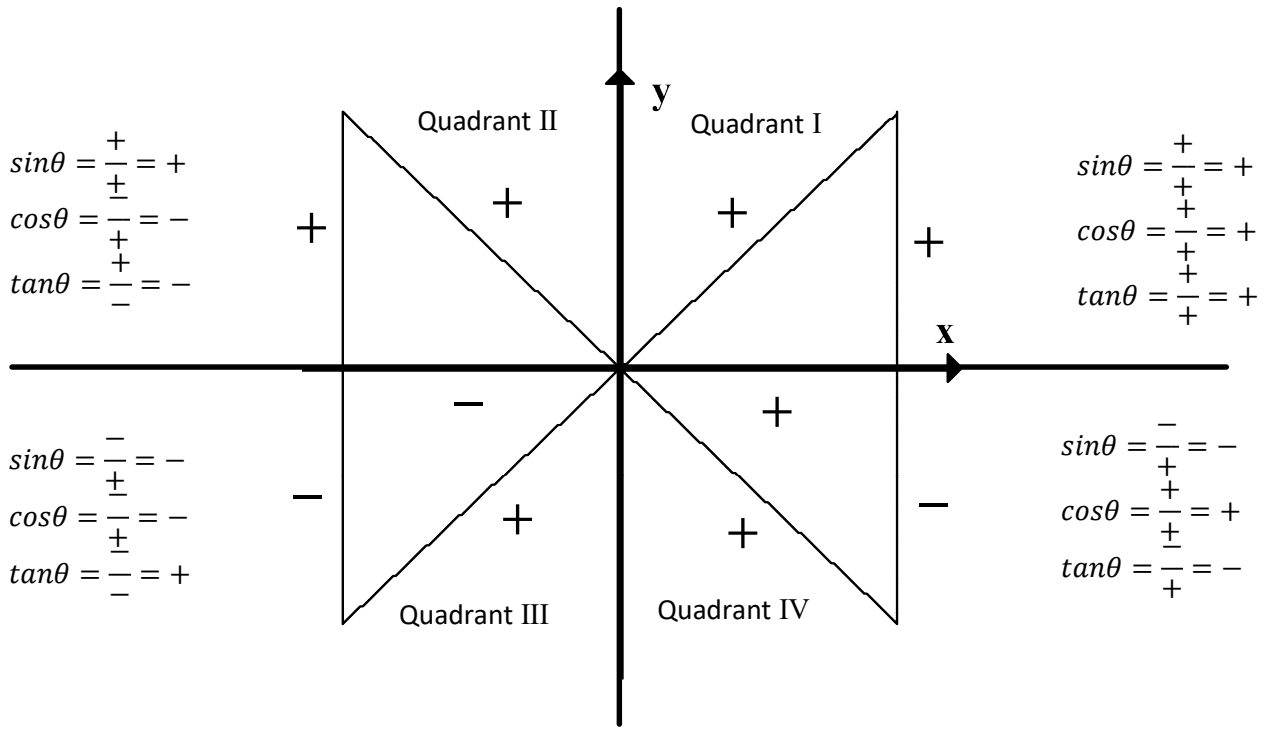
$\sin\theta = \frac{3}{5}$ $\theta = \sin^{-1}\left(\frac{3}{5}\right)$ $\theta = 36.9^\circ$	$\sec\theta = \frac{2}{1}$ $\cos\theta = \frac{1}{2}$ $\theta = \cos^{-1}\left(\frac{1}{2}\right)$ $\theta = 60^\circ$	$\sec\theta = \frac{H}{A}$ $\cos\theta = \frac{A}{H}$
---	---	--

Find θ in Radians

$\cos\theta = \frac{3}{5}$ $\theta = \cos^{-1}\left(\frac{3}{5}\right)$ $\theta = 0.93$	$\cot\theta = 3$ $\cot\theta = \frac{3}{1}$ $\tan\theta = \frac{1}{3}$ $\theta = \tan^{-1}\left(\frac{1}{3}\right)$ $\theta = 0.32$	$\cot\theta = \frac{A}{O}$ $\tan\theta = \frac{O}{A}$
---	---	--

C12 - 4.3 - ASTC Notes

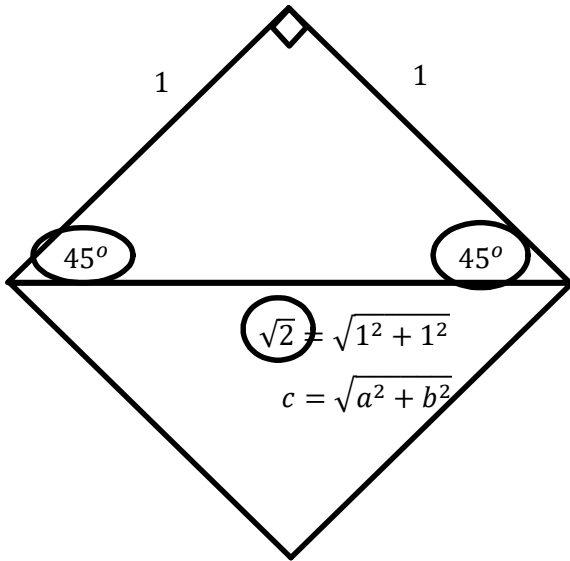
$(+)^2 + (-)^2 = +$	Remember: the hypotenuse is always positive.	$(+)^2 + (+)^2 = +$
$\sqrt{+} = +$		$\sqrt{+} = +$



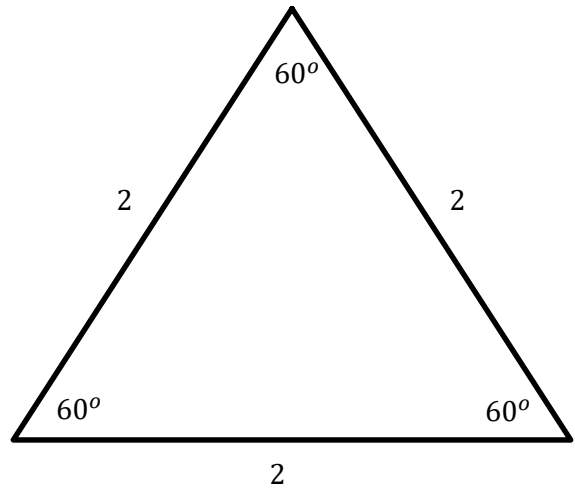
	<p style="font-size: 2em; font-weight: bold;">S A</p>	
<p>Students</p> <p>Only Sin positive.</p>		<p>All</p> <p>All (sin, cos, tan) positive</p>
<p>Only Tan positive.</p> <p>Take</p>	<p style="font-size: 2em; font-weight: bold;">T C</p>	<p>Calculus</p> <p>Only Cos positive.</p>

C12 - 4.3 - Special Triangles 30,45,60 sin/cos/tan Notes

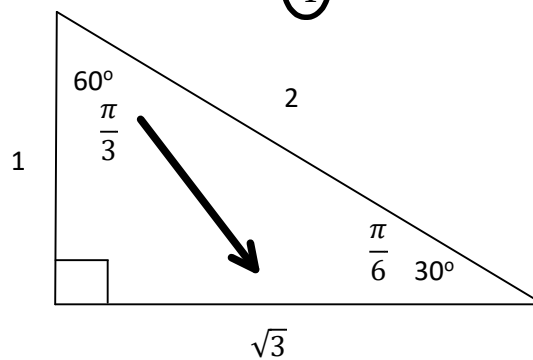
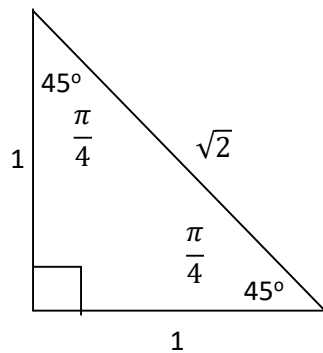
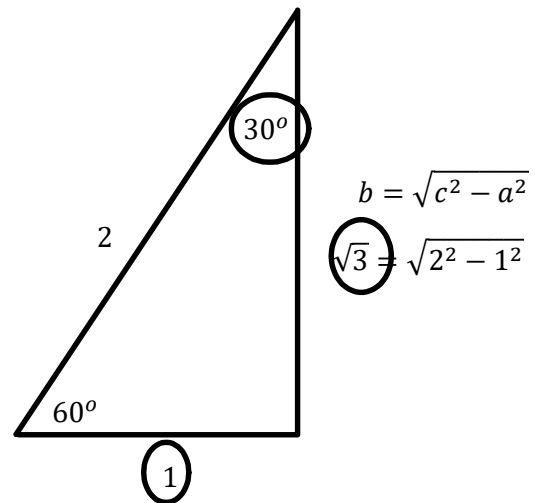
Right Isosceles, with sides =1



Half an equilateral with sides 2



Diagonal of a square with sides lengths of 1



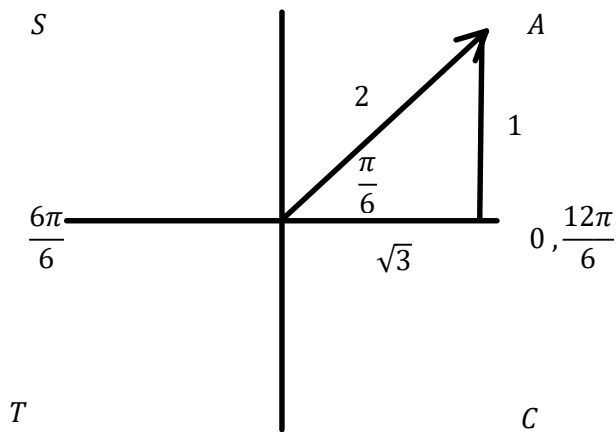
60 > 30
 $\sqrt{3} > 1$
 60 must open up to the root 3.
 And Vice Versa

$\sin \frac{\pi}{4} = \frac{1}{\sqrt{2}}$	$\sin \frac{\pi}{3} = \frac{\sqrt{3}}{2}$	$\sin \frac{\pi}{6} = \frac{1}{2}$
$\cos \frac{\pi}{4} = \frac{1}{\sqrt{2}}$	$\cos \frac{\pi}{3} = \frac{1}{2}$	$\cos \frac{\pi}{6} = \frac{\sqrt{3}}{2}$
$\tan \frac{\pi}{4} = \frac{1}{1}$	$\tan \frac{\pi}{3} = \frac{\sqrt{3}}{1}$	$\tan \frac{\pi}{6} = \frac{1}{\sqrt{3}}$

C12 - 4.3 - $\sin\theta = ?$ Notes

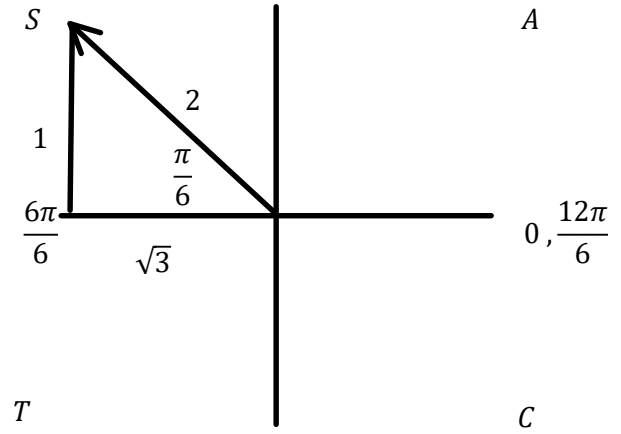
$$\sin\frac{\pi}{6} = ?$$

$$\sin\frac{\pi}{6} = \frac{1}{2}$$



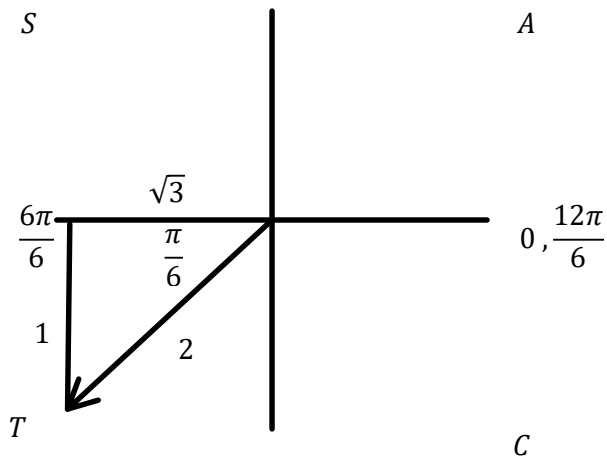
$$\sin\frac{5\pi}{6} = ?$$

$$\sin\frac{5\pi}{6} = \frac{1}{2}$$



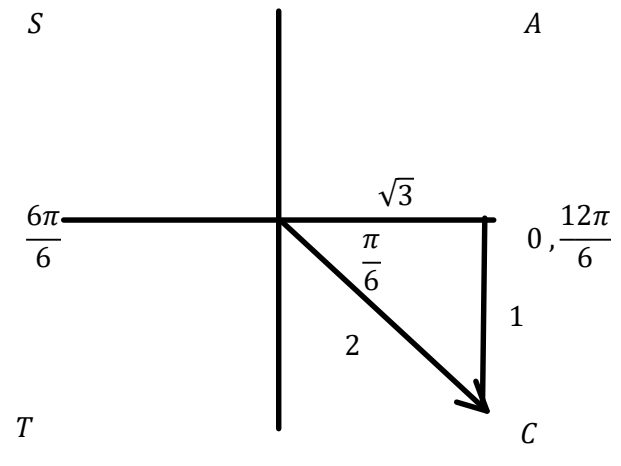
$$\sin\frac{7\pi}{6} = ?$$

$$\sin\frac{7\pi}{6} = -\frac{1}{2}$$



$$\sin\frac{11\pi}{6} = ?$$

$$\sin\frac{11\pi}{6} = -\frac{1}{2}$$



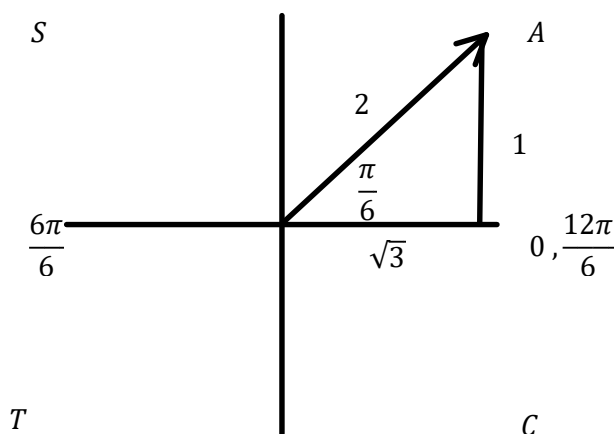
SOH - CAH - TOA

$\sin\theta = \frac{O}{H}$	$\cos\theta = \frac{A}{H}$	$\tan\theta = \frac{O}{A}$
$\csc\theta = \frac{1}{\sin\theta} = \frac{H}{O}$	$\sec\theta = \frac{1}{\cos\theta} = \frac{H}{A}$	$\cot\theta = \frac{1}{\tan\theta} = \frac{A}{O}$

C12 - 4.3 - $\sin\theta, \cos\theta, \tan\theta = ?$ Notes

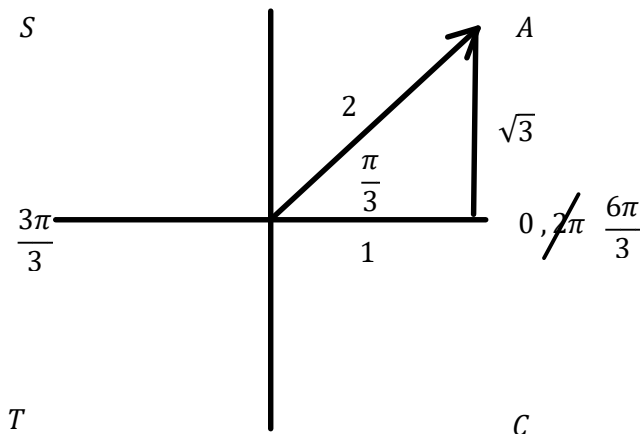
$$\cos \frac{\pi}{6} = ?$$

$$\cos \frac{\pi}{6} = \frac{\sqrt{3}}{2}$$



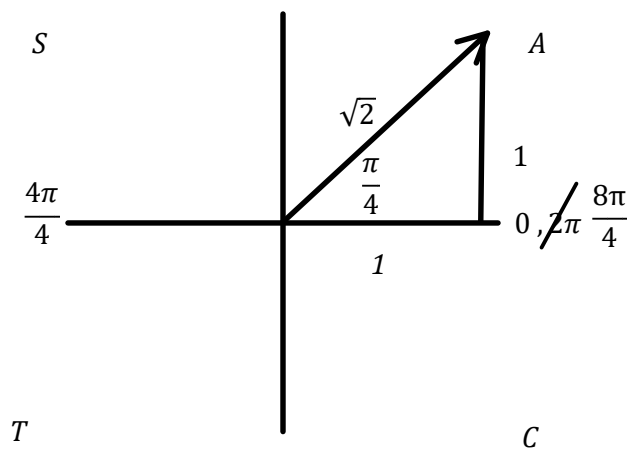
$$\sin \frac{\pi}{3} = ?$$

$$\sin \frac{\pi}{3} = \frac{\sqrt{3}}{2}$$



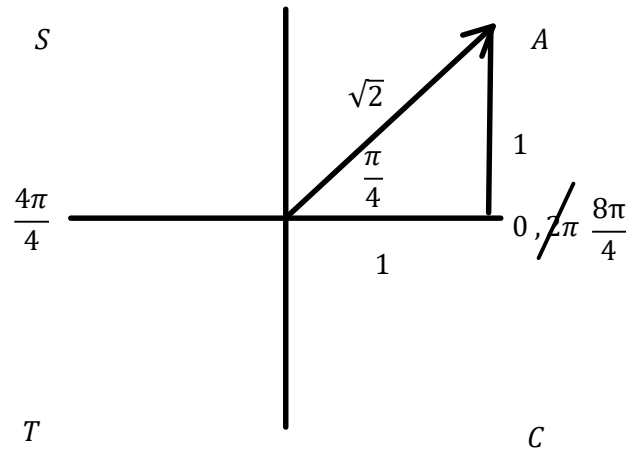
$$\sin \frac{\pi}{4} = ?$$

$$\sin \frac{\pi}{4} = \frac{1}{\sqrt{2}}$$



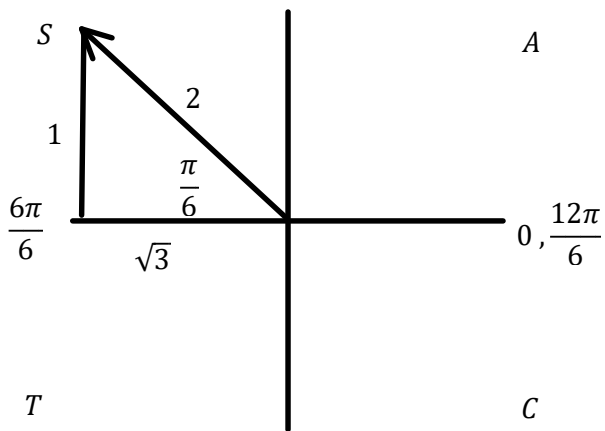
$$\tan \frac{\pi}{4} = ?$$

$$\tan \frac{\pi}{4} = 1$$



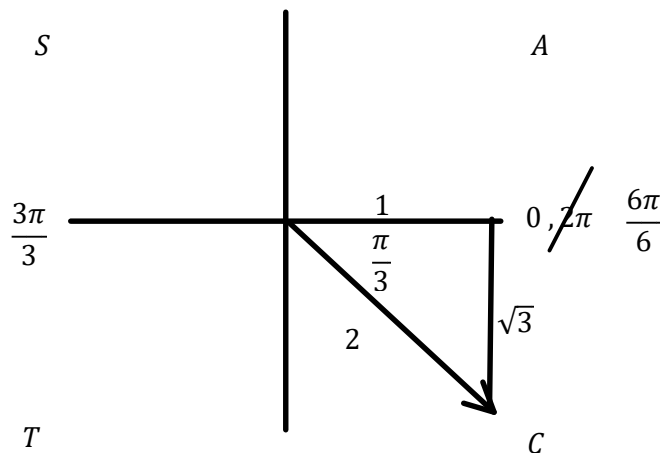
$$\cos \frac{5\pi}{6} = ?$$

$$\cos \frac{5\pi}{6} = -\frac{\sqrt{3}}{2}$$



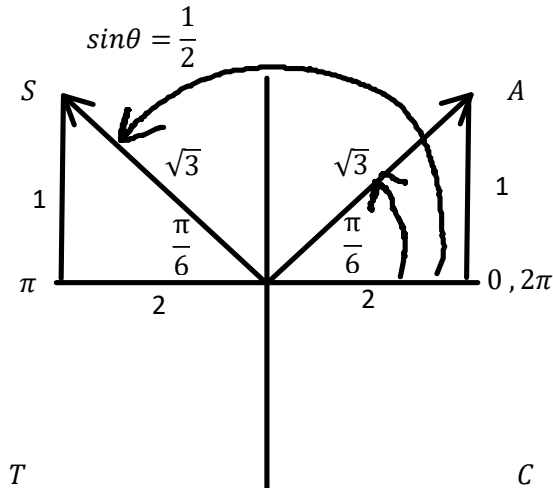
$$\tan \frac{5\pi}{3} = ?$$

$$\tan \frac{5\pi}{3} = -\sqrt{3}$$



C12 - 4.3 - $\sin\theta = \frac{1}{2}$ Notes

Solve for $\theta, 0^\circ \leq \theta < 2\pi$.



$$\theta_{stp} = \frac{\pi}{6} \qquad \theta_{stp} = \pi - \frac{\pi}{6}$$

$$= \frac{6\pi}{6} - \frac{\pi}{6}$$

$$= \frac{5\pi}{6}$$

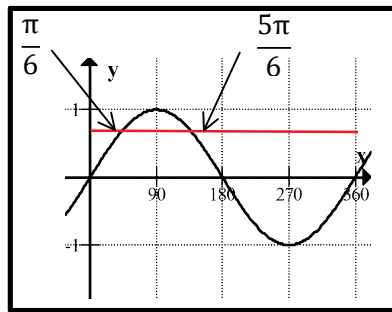
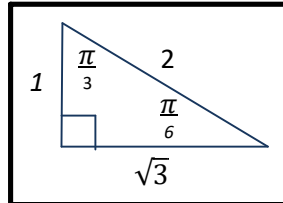
$$\theta_{stp} = \frac{\pi}{6}, \frac{5\pi}{6}$$

Solve for the arrows θ_{stp}

Draw two triangles where $\sin\theta$ is positive: ASTC Quadrant I, II

Label triangles based on special triangles/SOH CAH TOA
Label the reference angle according to special triangles.

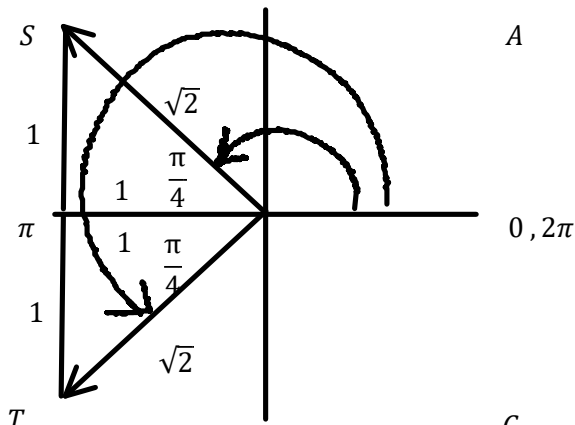
Draw an arrow from the principal axis to:
The first and second terminal arm.



Check your answer: $\sin\left(\frac{\pi}{6}\right) = \frac{1}{2} \qquad \sin\left(\frac{5\pi}{6}\right) = \frac{1}{2}$

Solve for $\theta, 0^\circ \leq \theta < 2\pi$ and state the General Solution.

$$\cos x = -\frac{1}{\sqrt{2}}$$



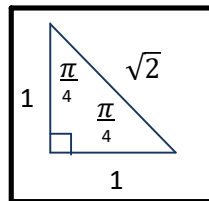
$$\theta_{stp} = \pi - \frac{\pi}{4} \qquad \theta_{stp} = \pi + \frac{\pi}{4}$$

$$\theta_{stp} = \frac{4\pi}{4} - \frac{\pi}{4}$$

$$\theta_{stp} = \frac{3\pi}{4} \qquad \theta_{stp} = \frac{4\pi}{4} + \frac{\pi}{4}$$

$$\theta_{stp} = \frac{5\pi}{4}$$

$$\theta_{stp} = \frac{3\pi}{4}, \frac{5\pi}{4}$$



General Solution: $\theta = \theta_{stp} \pm pn, n \in I$

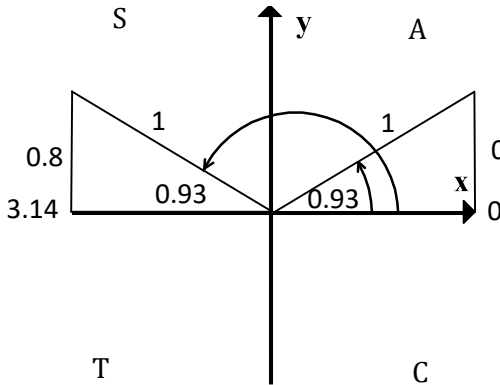
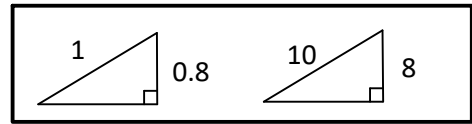
$$\theta = \frac{3\pi}{4} \pm 2\pi n, n \in I \qquad \theta = \frac{5\pi}{4} \pm 2\pi n, n \in I$$

C12 - 4.3 - $\sin\theta = .8$ & Point Notes

Solve for $\theta, 0^\circ \leq \theta < 2\pi$ and general solution

$$\sin\theta = 0.8$$

$$\sin\theta = \frac{0.8}{1} = \frac{8}{10}$$



Draw two triangles where $\sin\theta$ is positive:
ASTC Quadrant I, II

0.8 Label the triangles according to SOH CAH TOA

Solve for θ_r :

$$\theta_r = \sin^{-1}\left(+\frac{O}{H}\right)$$

$$\sin\theta = \frac{0.8}{1}$$

$$\theta_r = \sin^{-1}\left(+\frac{0.8}{1}\right)$$

$$\theta_r = 0.93$$

Draw an arrow from the principal axis to the first terminal arm,
draw an arrow from the principal axis to the second terminal arm.

Only inverse positives = θ_r

Solve for the arrows θ_{stp}

$$\theta_{stp} = 0.93 \quad \theta_{stp} = \pi - 0.93$$

$$= 2.21$$

Check your answer:

$$\sin 0.93 = 0.8$$

$$\sin 2.21 = 0.8$$

$$\theta_{stp} = 0.93, 2.21$$

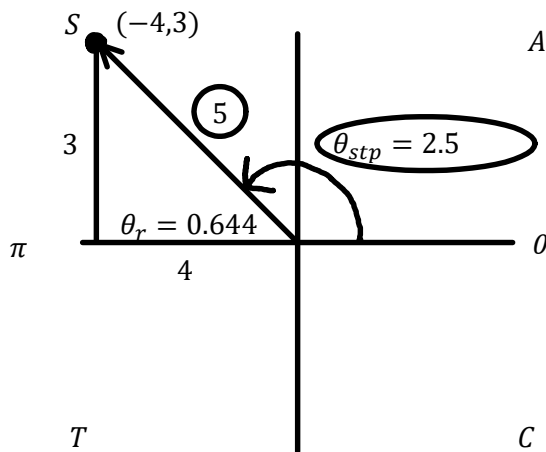
$$\text{General Solution: } \theta = \theta_{stp} \pm pn, n \in I$$

$$\theta = 0.93 \pm 2\pi n, n \in I$$

$$\theta = \theta_{stp} \pm pn, n \in I$$

$$\theta = 2.21 \pm 2\pi n, n \in I$$

Find $\sin x, \cos x, \tan x, \csc x, \sec x,$ and $\cot x$ for the following point. Find θ_{stp}



$$\sin\theta = +\frac{3}{5}$$

$$\csc x = +\frac{5}{3}$$

$$\cos\theta = -\frac{4}{5}$$

$$\sec x = -\frac{5}{4}$$

$$\tan\theta = -\frac{3}{4}$$

$$\cot x = -\frac{4}{3}$$

$$a^2 + b^2 = c^2$$

$$3^2 + 4^2 = c^2$$

$$9 + 16 = c^2$$

$$25 = c^2$$

$$\sqrt{25} = \sqrt{c^2}$$

$$5 = c$$

$$\tan\theta = \frac{O}{A}$$

$$= \frac{3}{-4}$$

$$\tan\theta = -\frac{3}{4}$$

$$\tan\theta = -0.75$$

$$\theta = \tan^{-1}(+0.75)$$

$$\theta = 0.644$$

$$\pi - 0.644 = 2.50$$

$$\theta_{stp} = 2.50$$

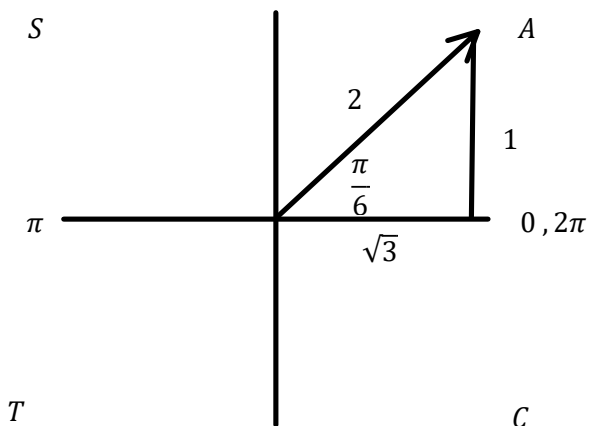
Only inverse positives = θ_r

C12 - 4.3 - $\csc\theta, \sec\theta, \cot\theta = ?$ Notes

$$\sec \frac{\pi}{6} = ?$$

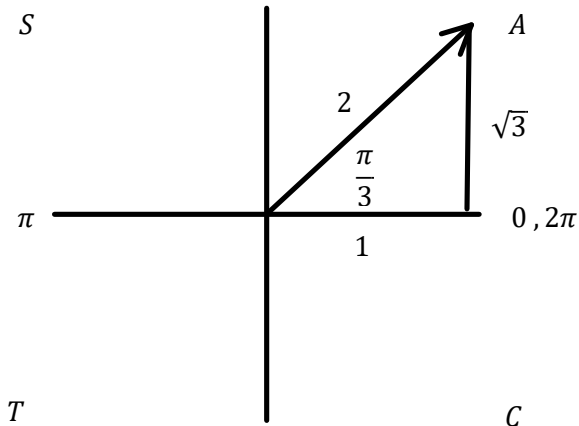
$$\sec \frac{\pi}{6} = \frac{2}{\sqrt{3}}$$

$$\sec \frac{\pi}{6} \neq \cos \left(\frac{6}{\pi} \right)$$



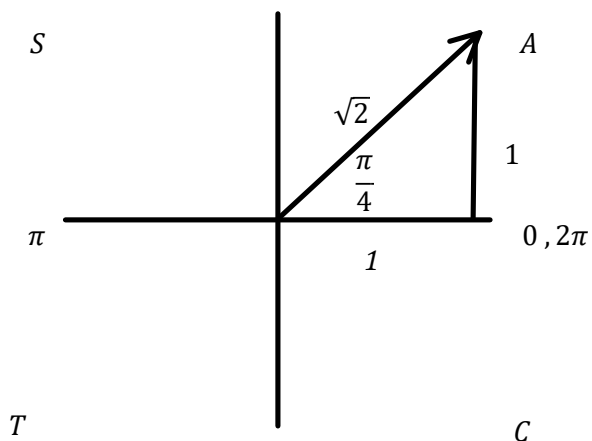
$$\csc \frac{\pi}{3} = ?$$

$$\csc \frac{\pi}{3} = \frac{2}{\sqrt{3}}$$



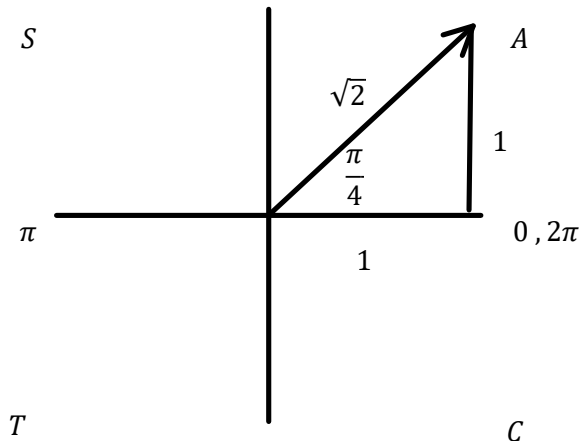
$$\csc \frac{\pi}{4} = ?$$

$$\csc \frac{\pi}{4} = \sqrt{2}$$



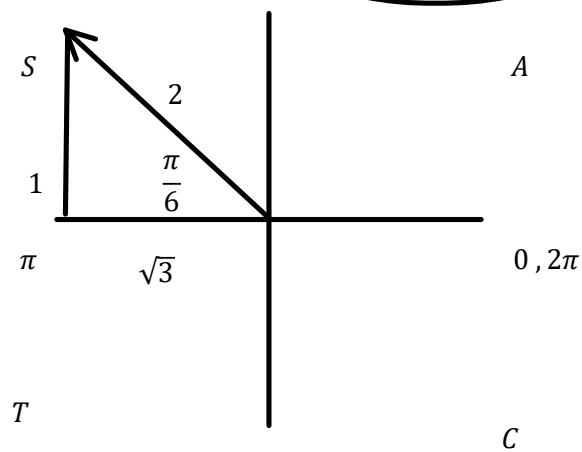
$$\cot \frac{\pi}{4} = ?$$

$$\cot \frac{\pi}{4} = 1$$



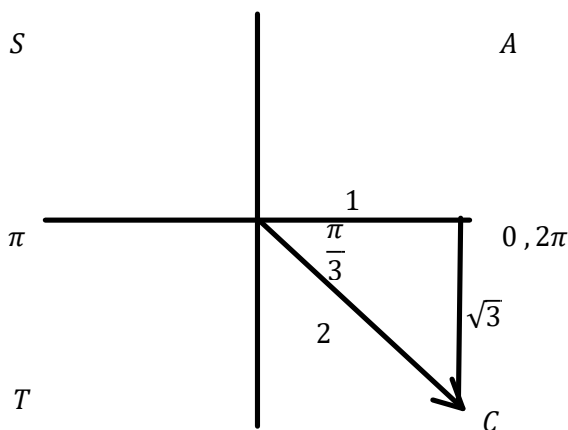
$$\sec \frac{5\pi}{6} = ?$$

$$\sec \frac{5\pi}{6} = -\frac{2}{\sqrt{3}}$$



$$\cot \frac{5\pi}{3} = ?$$

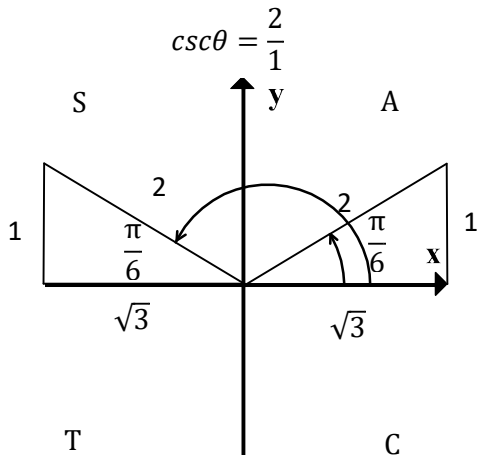
$$\cot \frac{5\pi}{3} = -\frac{1}{\sqrt{3}}$$



C12 - 4.3 - $\csc\theta = 2$ Notes

Solve for $\theta, 0^\circ \leq \theta < 2\pi$.

OR $\sin\theta = \frac{1}{2}$



Draw two triangles where $\csc\theta$ is positive:
ASTC Quadrant I, II

Label the triangles according to special triangles/SOH CAH TOA

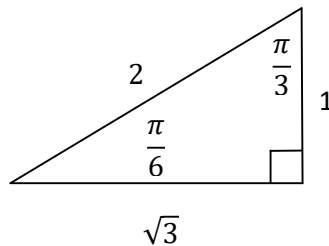
Label the reference angle according to special triangles.

Draw an arrow from the principal axis to the first terminal arm
Draw an arrow from the principal axis to the second terminal arm.

$$\theta_{stp} = \frac{\pi}{6}$$

$$\begin{aligned} \theta_{stp} &= \pi - \frac{\pi}{6} \\ &= \frac{6\pi}{6} - \frac{\pi}{6} \\ &= \frac{5\pi}{6} \end{aligned}$$

$$\theta_{stp} = \frac{\pi}{6}, \frac{5\pi}{6}$$



Solve for the arrows θ_{stp}

Check your answer:

$$\begin{aligned} \cot\theta &= 0.1 \\ \cot\theta &= \frac{0.1}{1} = \frac{1}{10} \\ \tan\theta &= \frac{1}{0.1} = \frac{10}{1} \\ \theta &= \tan^{-1}(10) \\ \theta &= 84.24^\circ \\ \dots \\ \theta &= 84.24, 264.29^\circ \end{aligned}$$

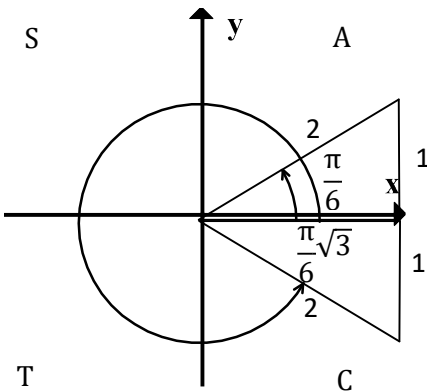
Solve for $\theta, 0^\circ \leq \theta < 2\pi$ and state the General Solution.

$$\sec\theta = \frac{2}{\sqrt{3}}$$

$$\cos\theta = \frac{\sqrt{3}}{2}$$

$$\begin{aligned} \theta_{stp} &= \frac{\pi}{6} & \theta_{stp} &= 2\pi - \frac{\pi}{6} \\ & & &= \frac{11\pi}{6} \end{aligned}$$

$$\theta_{stp} = \frac{\pi}{6}, \frac{11\pi}{6}$$



General Solution: $\theta = \theta_{stp} \pm pn, n \in I$

$$\theta = \frac{\pi}{6} \pm 2\pi n, n \in I \quad \theta = \frac{11\pi}{6} \pm 2\pi n, n \in I$$