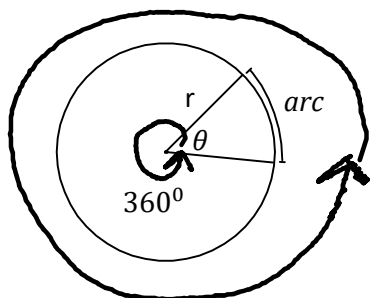


C12 - 4.9 - Arc Length, Sector Area Notes

θ in radians



Circumference

$$\frac{\text{arc length}}{\text{Circumference}} = \frac{\theta}{360^\circ}$$

Grade 8-11

$$\frac{\text{arc length}}{\text{Circumference}} = \frac{\theta}{2\pi}$$

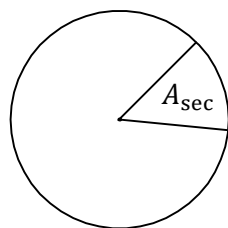
$$\begin{aligned} \frac{a}{2\pi r} &= \frac{\theta}{2\pi} \\ \cancel{2\pi} \times \frac{a}{2\pi r} &= \frac{\cancel{2\pi}}{\cancel{2\pi}} \times \theta \\ \frac{a}{r} &= \theta \\ r \times \frac{a}{r} &= \theta \times r \end{aligned}$$

$$a = \theta r$$

$$a = \theta r$$

θ must be in radians

Sector Area



$$\frac{\text{Area}_{\text{sector}}}{\text{Area}_{\text{total}}} = \frac{\text{arc length}}{\text{Circumference}}$$

$$A = \frac{\theta r^2}{2}$$

$$\frac{A_{\text{sec}}}{\pi r^2} = \frac{a}{2\pi r}$$

$$A_{\text{sec}} = \frac{ar}{2}$$

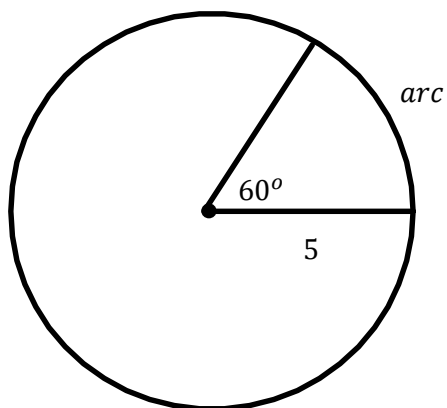
$$A = \frac{ar}{2}$$

$$\frac{A_{\text{sec}}}{\pi r^2} = \frac{a}{2\pi r} = \frac{\theta}{360^\circ} = \frac{\theta}{2\pi}$$

They are all equal to each other.

C12 - 4.9 - Arc Length Notes

Find the arc length



$$\frac{a}{C} = \frac{\theta}{360}$$

$$\frac{a}{2\pi r} = \frac{360}{60}$$

$$a = \frac{\pi(5)}{3}$$

$$a = 5.24$$

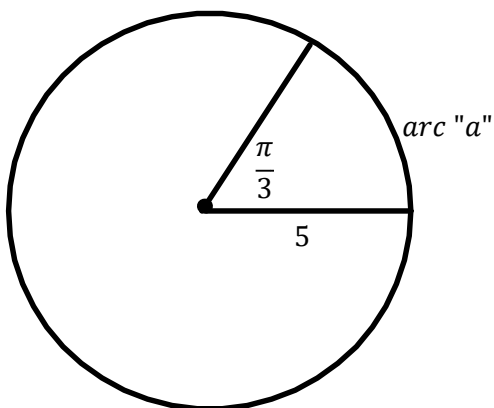
$$C = 2\pi r$$

$$C = 2\pi \times 5$$

$$C = 31.4$$

$$\frac{60^\circ}{360^\circ} = \frac{1}{6} \text{ of circle}$$

$$\frac{1}{6} \times 31.4 = 5.2$$

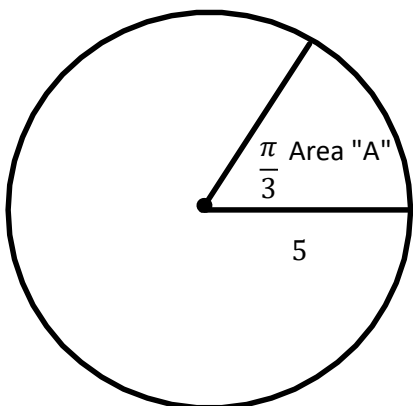


$$a = \theta r$$

$$a = \frac{\pi}{3} \times 5$$

$$a = 5.24$$

Find the Area of the Sector



$$\frac{Area_{sector}}{Area_{Total}} = \frac{\theta}{2\pi}$$

$$\frac{A_{sec}}{\pi r^2} = \frac{\theta}{2\pi}$$

$$A_{sec} = \frac{\theta r^2}{2}$$

$$A_{sec} = \frac{\left(\frac{\pi}{3} \times 5^2\right)}{2}$$

$$A_{sec} = 13.09$$

$$A = \pi r^2$$

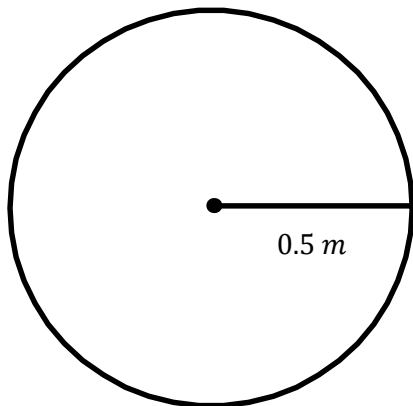
$$A = \pi(5)^2$$

$$A = 78.54$$

$$\frac{1}{6} \times 78.54 = 13.09$$

C12 - 4.9 - Angular Velocity Notes

Find the angular velocity of a wheel travelling 25 meters per second if the radius 0.5 meters. Find the arc in 0.1 seconds.



$$w = \frac{\theta}{t}$$

Angular Velocity "w"

$$C = 2\pi r$$

$$C = 2\pi(0.5)$$

$$C = 3.14 \text{ m}$$

$$1 \text{ Rev} = 2\pi$$

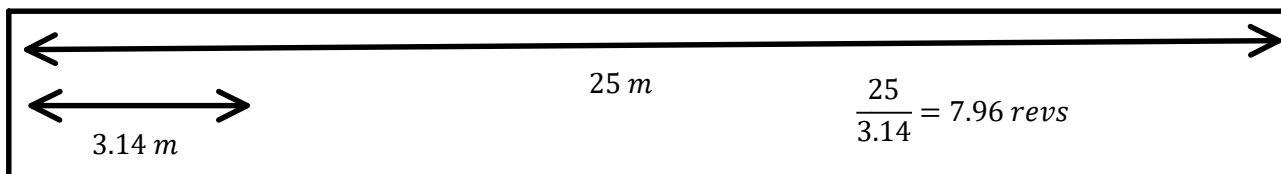
$$w = \frac{v}{C} \times 2\pi$$

$$w = \frac{v}{r}$$

$$\frac{25 \text{ m}}{\text{s}} \times \frac{1 \text{ revolution}}{3.14 \text{ m}} = 7.96 \frac{\text{Rev}}{\text{s}}$$

$$7.96 \times \frac{2\pi}{1} = 15.92 \frac{\text{Rad}}{\text{s}}$$

$$w = 15.92\pi \frac{\text{Rad}}{\text{s}}$$



$$25 \frac{\text{m}}{\text{s}} \Rightarrow 0.04 \frac{\text{s}}{\text{m}}$$

$$\frac{25}{1} \Rightarrow \frac{1}{25} = 0.04$$

$$15.92\pi \frac{\text{Rad}}{\text{s}} \times 0.1 \text{ s} = 5 \text{ Rad}$$

$$w = \frac{\theta}{t}$$

$$a = \theta r$$

$$a = 5(0.5)$$

$$a = 2.5 \text{ m}$$

$$\frac{25 \text{ m}}{\text{s}} \times \frac{1 \text{ revolution}}{3.14 \text{ m}} = 7.96 \frac{\text{Rev}}{\text{s}}$$

$$1 \text{ Rev} = 360^\circ$$

$$7.96 \times \frac{360^\circ}{1} = 2865.6 \frac{\circ}{\text{s}}$$

$$w = 2865.6 \frac{\circ}{\text{s}}$$

$$w = \frac{v}{C} \times 360^\circ$$

$$25 \frac{\text{m}}{\text{s}} \times 0.1 \text{ s} = 2.5 \text{ m}$$

$$d = vt$$