

C12 - 4.1 - Degree/Radian Conversion HW

Degrees to Radians:

Radians to Degrees:

$$\frac{180^\circ}{\pi} = \frac{\pi}{180^\circ}$$

$$\times \frac{\pi}{180^\circ}$$

$$\times \frac{180^\circ}{\pi}$$

π and 180° are the same thing, just in different units

Find θ in radians

40°

60°

100°

135°

10°

0°

29°

420°

330°

Find θ in degrees

$\frac{\pi}{6}_{rad}$

$\frac{\pi}{12}_{rad}$

$\frac{5\pi}{3}_{rad}$

$\frac{3\pi}{5}_{rad}$

$\frac{2\pi}{5}_{rad}$

$\frac{2\pi}{7}_{rad}$

3.14_{rad}

5.12_{rad}

7_{rad}

2

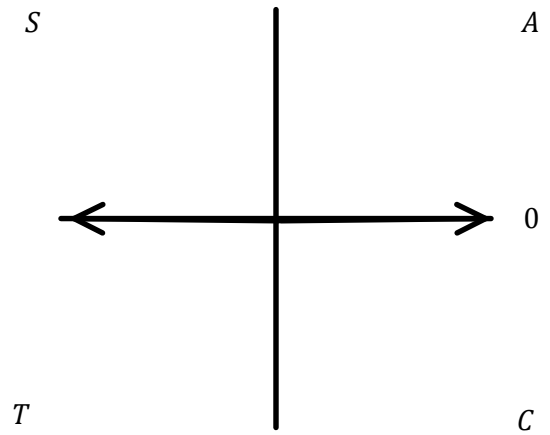
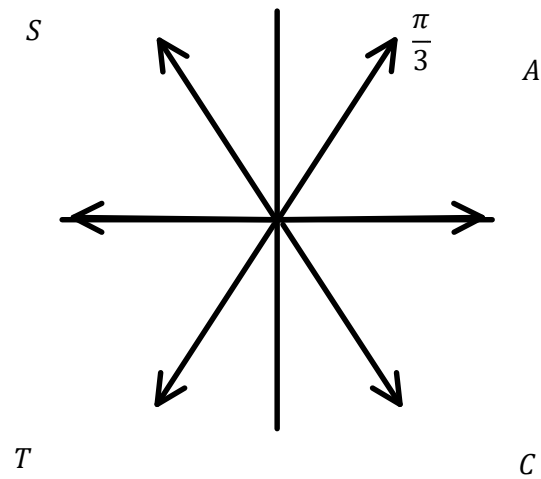
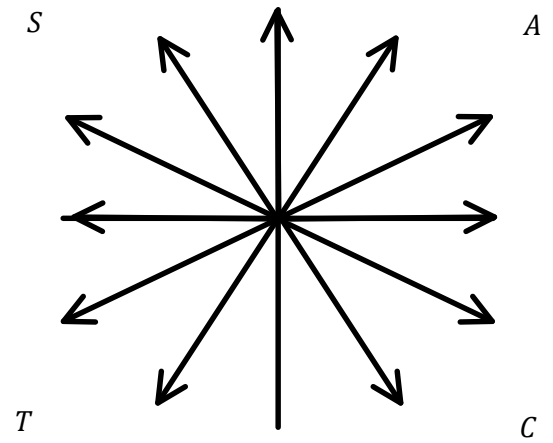
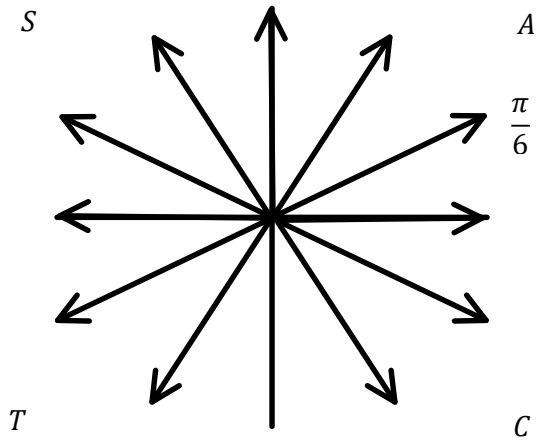
10

1

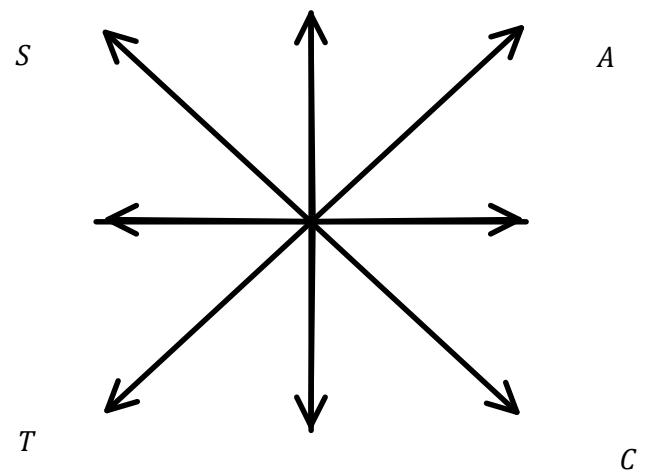
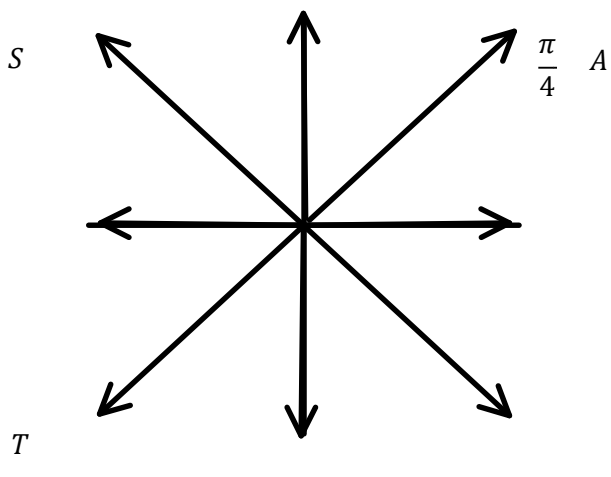
C12 - 4.1 - $\frac{\# \pi}{\#}$ HMK

Label each terminal arm θ_{stp} .

Simplify



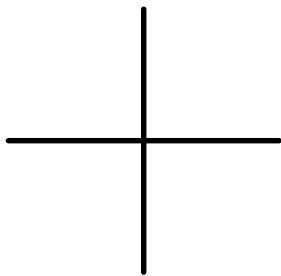
Simplify



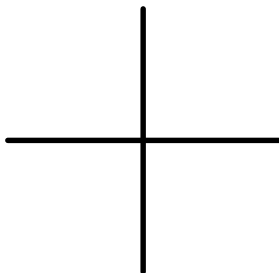
C12 - 4.2 - Special θ_{stp} , Find θ_r , HW

Sketch θ_{stp} , Find θ_r .

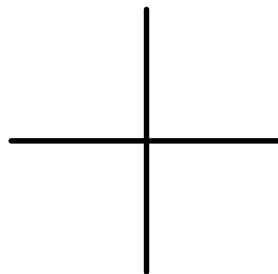
$$\frac{\pi}{3}$$



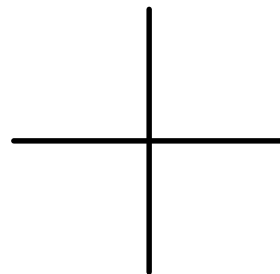
$$\frac{5\pi}{4}$$



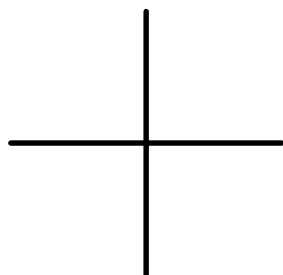
$$\frac{\pi}{2}$$



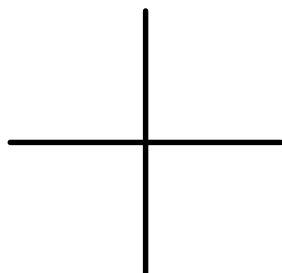
$$\frac{11\pi}{6}$$



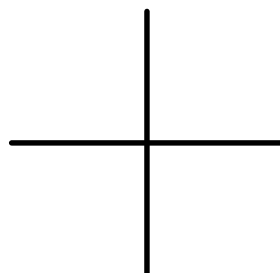
$$\frac{4\pi}{3}$$



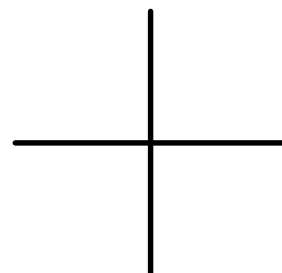
$$\frac{\pi}{6}$$



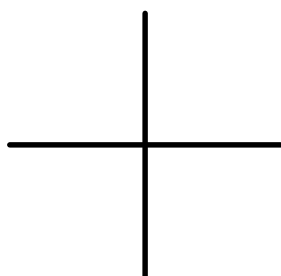
$$\frac{\pi}{4}$$



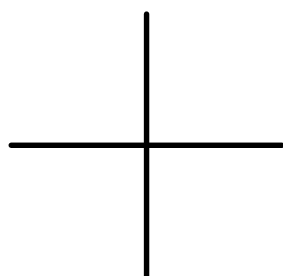
$$\frac{5\pi}{6}$$



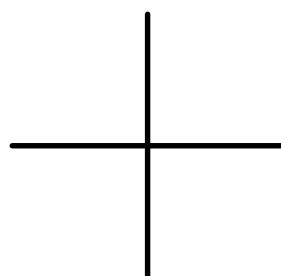
$$\frac{7\pi}{4}$$



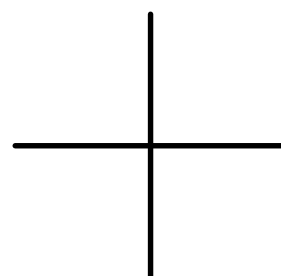
$$2\pi$$



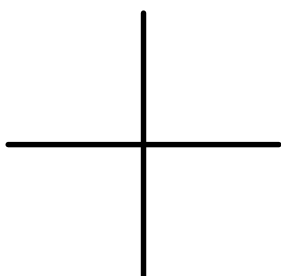
$$\frac{3\pi}{4}$$



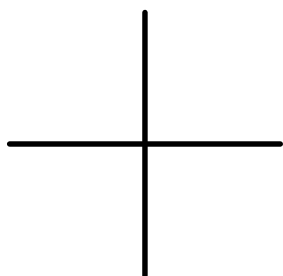
$$\frac{3\pi}{2}$$



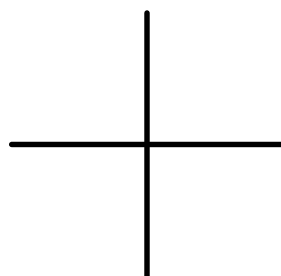
$$\frac{5\pi}{3}$$



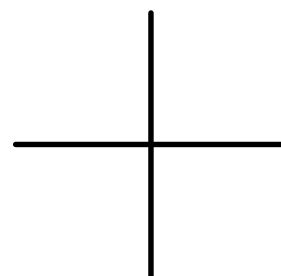
$$\pi$$



$$\frac{7\pi}{6}$$



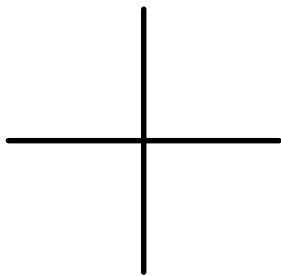
$$\frac{2\pi}{3}$$



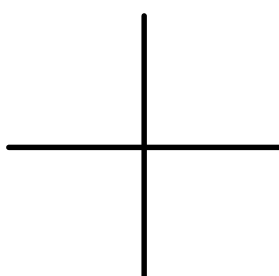
C12 - 4.2 - Odd/Dec *Sketch θ_{stp} , Find θ_r , HW*

Sketch θ_{stp} , Find θ_r .

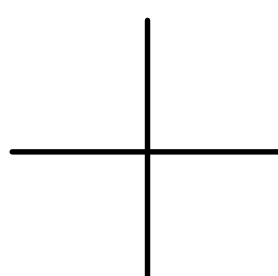
$$\frac{\pi}{5}$$



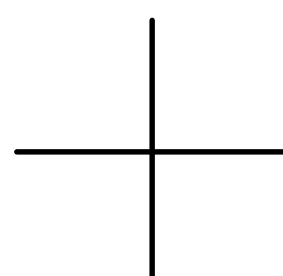
$$\frac{5\pi}{7}$$



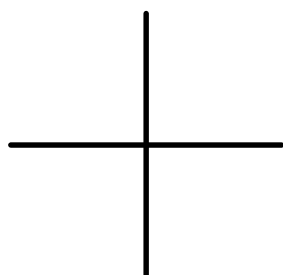
$$0.64$$



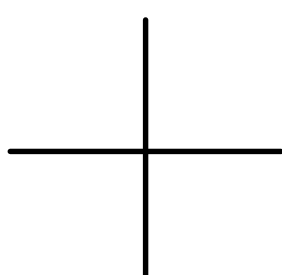
$$\frac{11\pi}{12}$$



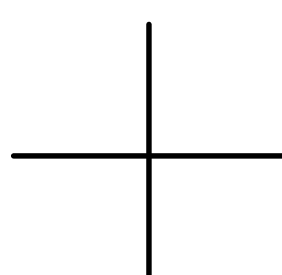
$$\frac{4\pi}{5}$$



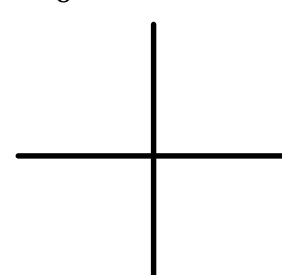
$$\frac{\pi}{7}$$



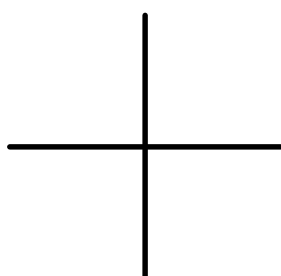
$$1.70$$



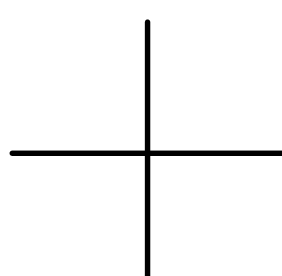
$$\frac{5\pi}{8}$$



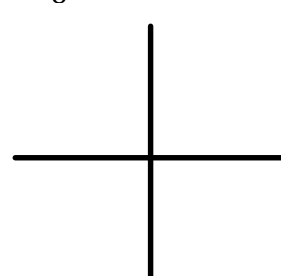
$$\frac{7\pi}{12}$$



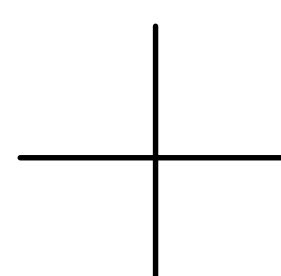
$$5.2$$



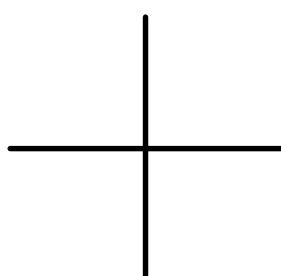
$$\frac{3\pi}{8}$$



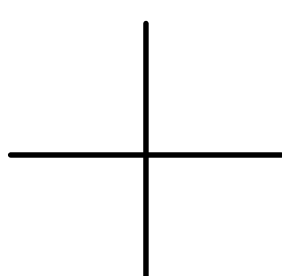
$$\frac{3\pi}{5}$$



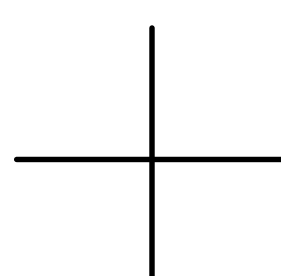
$$\frac{5\pi}{11}$$



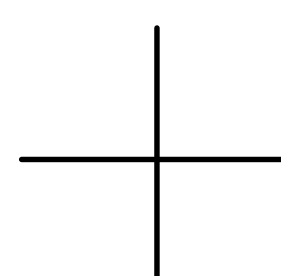
$$\frac{3\pi}{11}$$



$$3.6$$

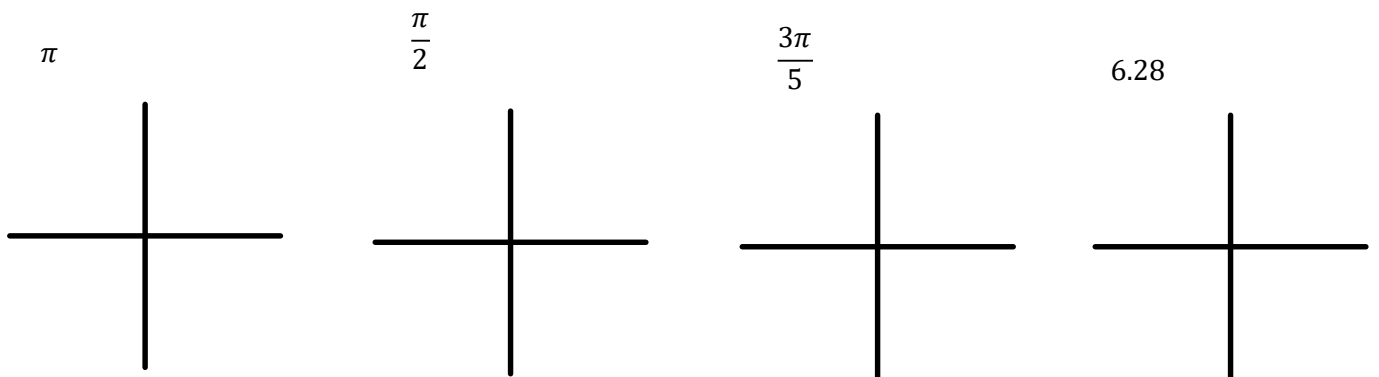
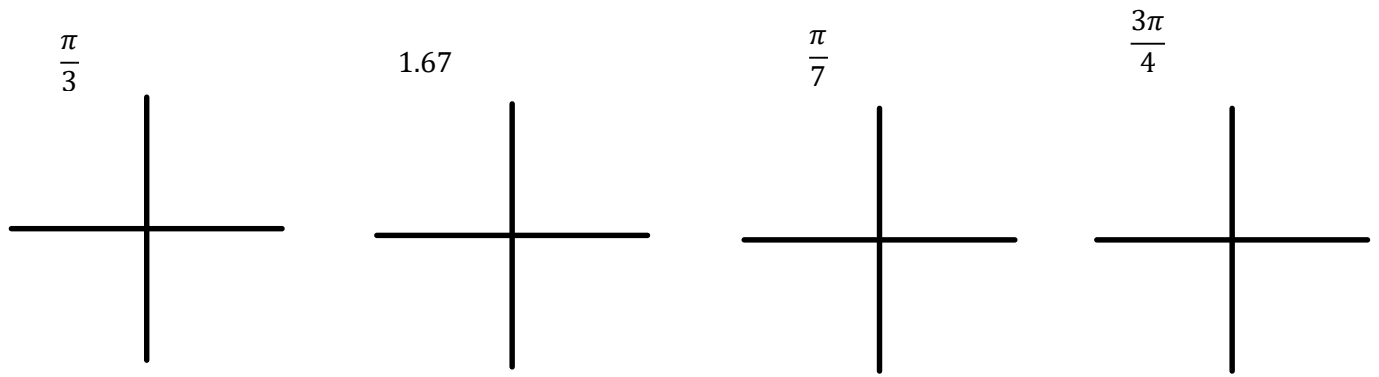


$$\frac{2\pi}{9}$$

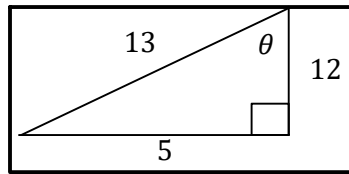


C12 - 4.2 - Cot Sketch, Find θ_{cot} , θ_{gen} HW

Sketch θ_{stp} , Find a θ_{cot} , and θ_{gen} .



C12 - 4.3 - Find Ratio/Type in Calc HW



$$\sin\theta =$$

$$\csc\theta =$$

$$\cos\theta =$$

$$\sec\theta =$$

$$\tan\theta =$$

$$\cot\theta =$$

Type in Calculator (Degrees or Radians)

$$\sin 14^\circ =$$

$$\csc 25^\circ =$$

$$\sec 105^\circ =$$

$$\cot 150^\circ =$$

$$\cos 274^\circ =$$

$$\sin 60^\circ =$$

$$\tan(-240^\circ) =$$

$$\sin 1.7 =$$

$$\csc 5.9 =$$

$$\sec\left(\frac{2}{7}\right) =$$

$$\cot 0.6 =$$

$$\cos\frac{\pi}{6} =$$

$$\tan(3\pi) =$$

$$\cos 2\pi =$$

Find θ in Degrees

$$\sin\theta = \frac{3}{8}$$

$$\sec\theta = \frac{7}{3}$$

Find θ in Radians

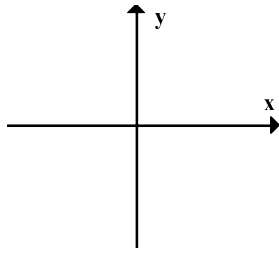
$$\cos\theta = 0.9$$

$$\cot\theta = 5$$

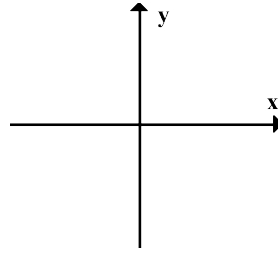
C12 - 4.3 - ASTC HW

Draw 2 triangles in the quadrants for the following statements

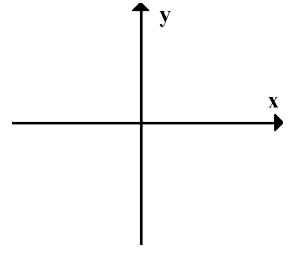
$$\cos \theta > 0$$



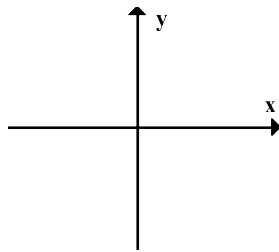
$$\tan \theta > 0$$



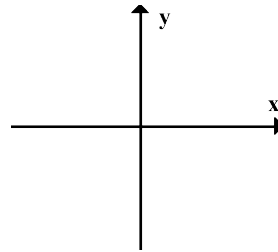
$$\sin \theta > 0$$



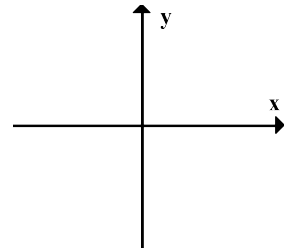
$$\cos \theta < 0$$



$$\tan \theta < 0$$

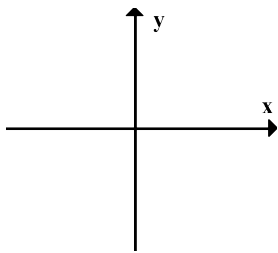


$$\sin \theta < 0$$

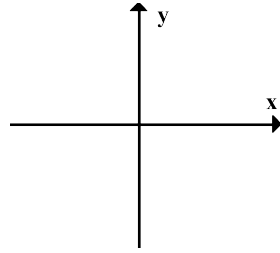


Draw a triangle in the quadrant for following statements

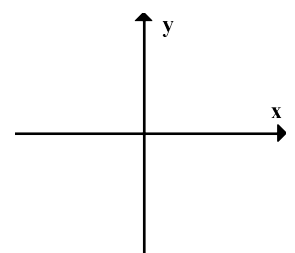
$$\cos \theta > 0 \text{ and } \sin \theta < 0$$



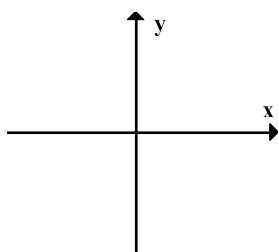
$$\cos \theta < 0 \text{ and } \tan \theta > 0$$



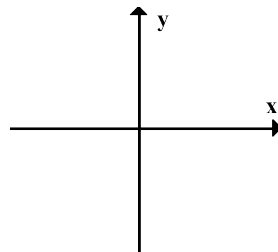
$$\tan \theta > 0 \text{ and } \sin \theta > 0$$



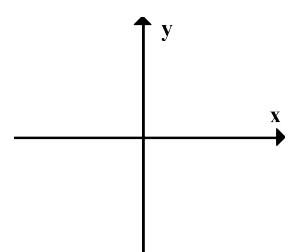
$$\cos \theta < 0 \text{ and } \sin \theta < 0$$



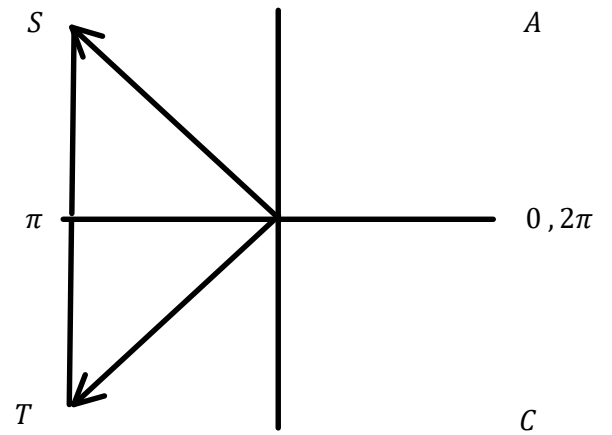
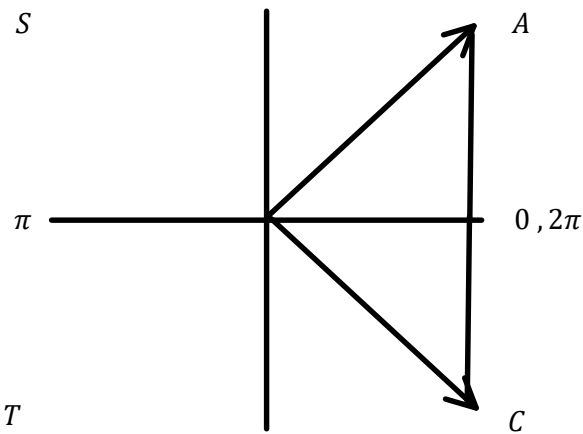
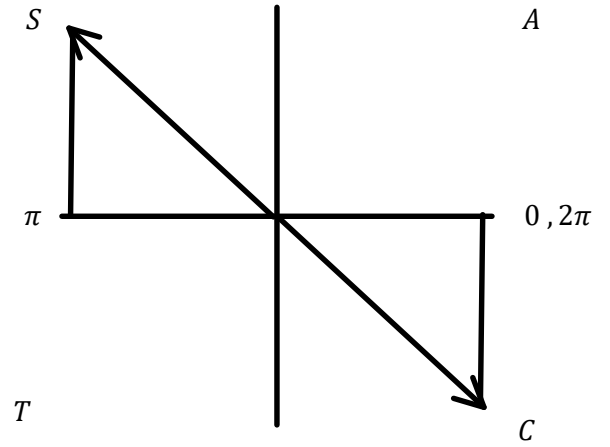
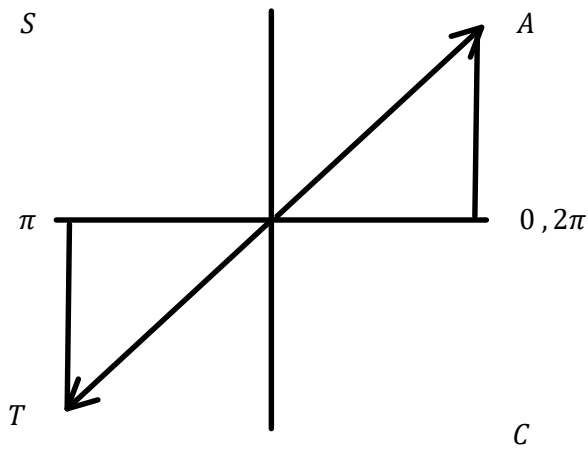
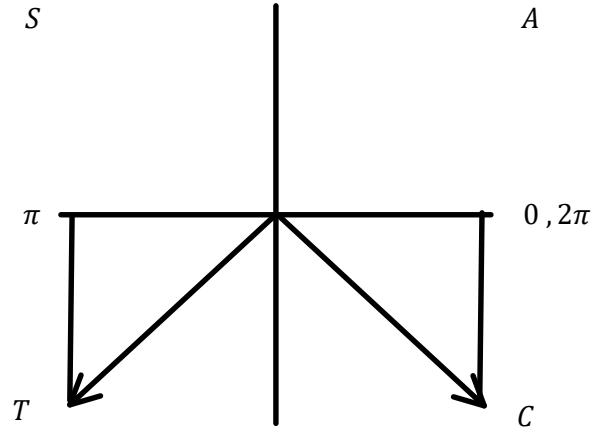
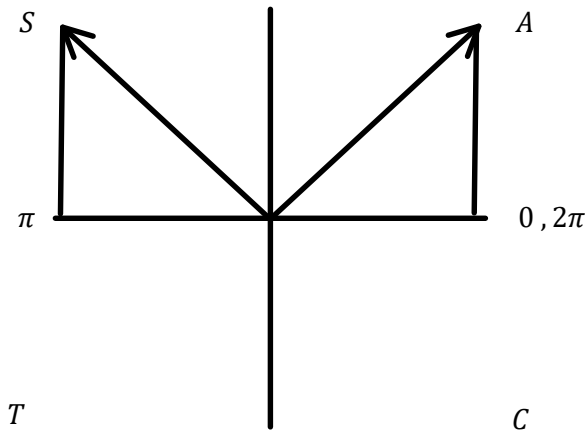
$$\cos \theta < 0 \text{ and } \tan \theta < 0$$



$$\tan \theta < 0 \text{ and } \sin \theta > 0$$



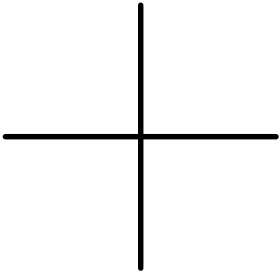
C12 - 4.3 - Draw θ_{stp} $0 \leq \theta < 2\pi$ HMK



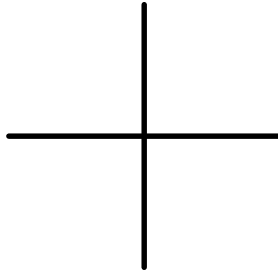
C12 - 4.3 - Solve $\sin\theta, \cos\theta, \tan\theta = ?$ HMK

Solve

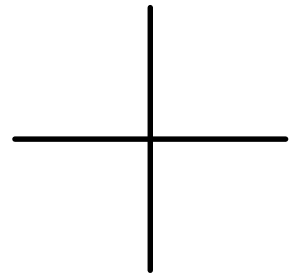
$$\sin\frac{\pi}{3} =$$



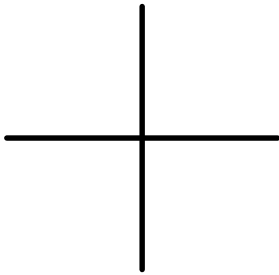
$$\tan\frac{5\pi}{4} =$$



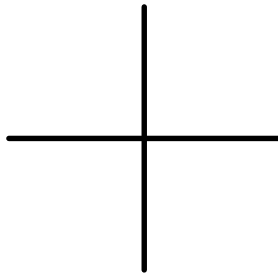
$$\sin\frac{11\pi}{6} =$$



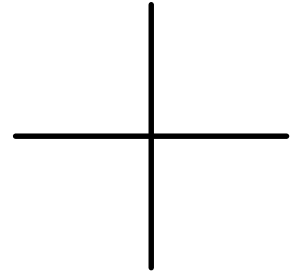
$$\sin\frac{4\pi}{3} =$$



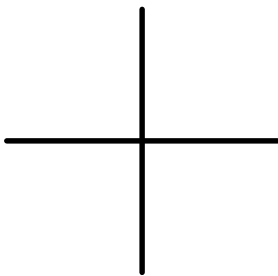
$$\cos\frac{\pi}{6} =$$



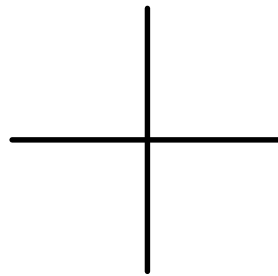
$$\tan\frac{\pi}{4} =$$



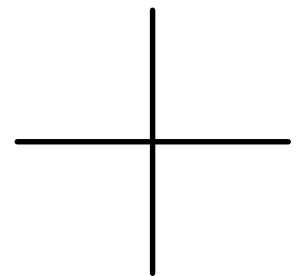
$$\tan\frac{7\pi}{4} =$$



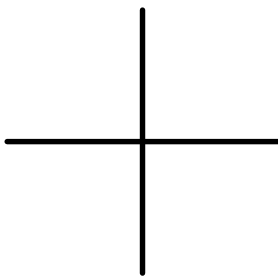
$$\sin\frac{5\pi}{6} =$$



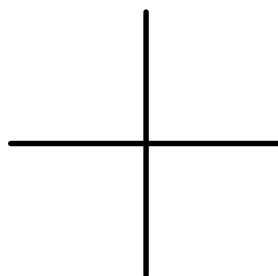
$$\cos\frac{3\pi}{4} =$$



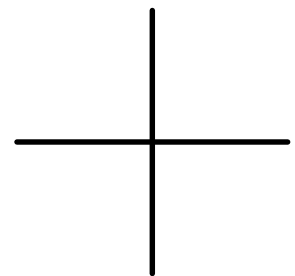
$$\sin\frac{5\pi}{3} =$$



$$\tan\frac{7\pi}{6} =$$



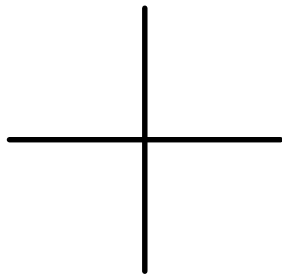
$$\sin\frac{2\pi}{3} =$$



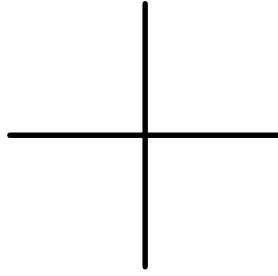
C12 - 4.3 - Solve $\sin x = \frac{1}{2}$ HW

Solve for x , $0 \leq x < 2\pi$, answer should say $x =$

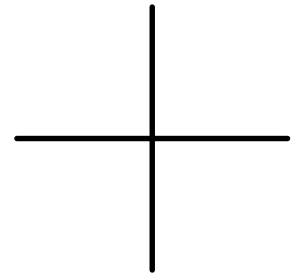
$$\sin x = \frac{1}{2}$$



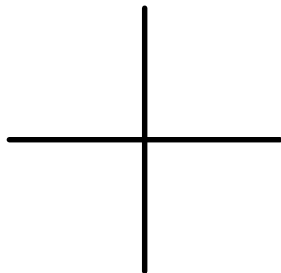
$$\cos x = -\frac{1}{\sqrt{2}}$$



$$\tan x = -1$$

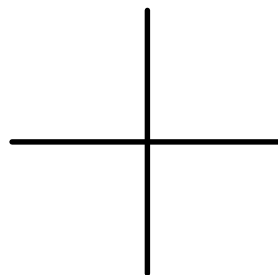


$$\sin x = \frac{\sqrt{3}}{2}$$

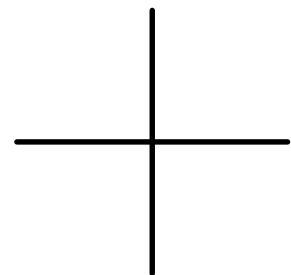


*rationalize

$$\cos x = \frac{\sqrt{2}}{2}$$



$$\sin x = -\frac{1}{2}$$



$$\cos x = \frac{1}{2}$$

$$\sin x = -\frac{1}{\sqrt{2}}$$

$$\tan x = -\frac{1}{\sqrt{3}}$$

$$\cos x = -2$$

$$\tan x = \sqrt{3}$$

$$\tan x = \frac{1}{\sqrt{3}}$$

$$\cos x = -\frac{\sqrt{3}}{2}$$

$$\tan x = 1$$

$$\sin x = -\frac{\sqrt{3}}{2}$$

$$\tan x = -\sqrt{3}$$

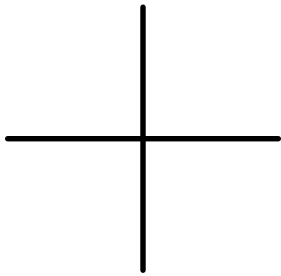
$$\sin x = \frac{1}{\sqrt{2}}$$

$$\cos x = \frac{\sqrt{3}}{2}$$

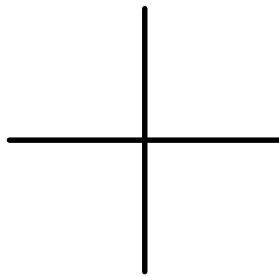
C12 - 4.3 - $\sin\theta = 0.8$ HW

Solve for x , $0 \leq x < 2\pi$, answer should say $x =$

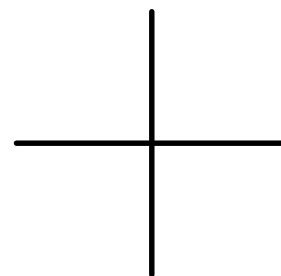
$$\tan x = -2$$



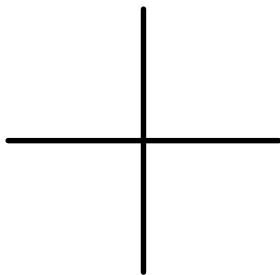
$$\sin x = 0.6$$



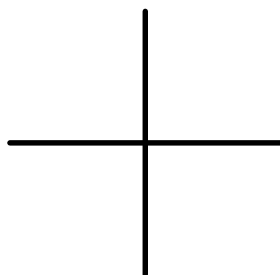
$$\cos x = \frac{1}{4}$$



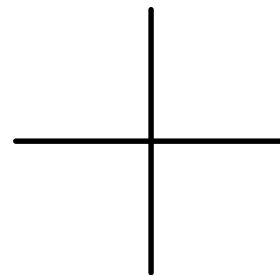
$$\sin x = -0.4$$



$$\tan x = \frac{1}{5}$$



$$\cos x = 2$$



$$\sin x = -0.1$$

$$\tan x = \frac{4}{5}$$

$$\sin x = -0.8$$

$$\cos x = -\frac{1}{5}$$

$$\tan x = -0.707$$

$$\sin x = \frac{1}{3}$$

$$\cos x = -0.5$$

$$\cos x = 0.75$$

$$\tan x = -0.866$$

$$\cos x = -0.65$$

$$\sin x = -\frac{2}{3}$$

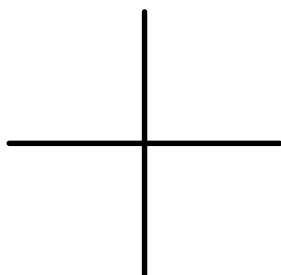
$$\tan x = 0.35$$

C12 - 4.3 - Point Trig Ratio HW

SOH CAH TOA

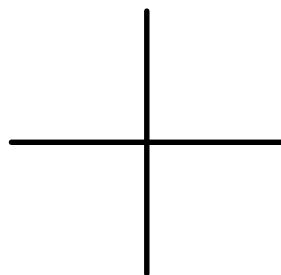
Find all 6 trig functions for the following points. And Find the Reference Angle and Angle in Standard Position.

(4,3)



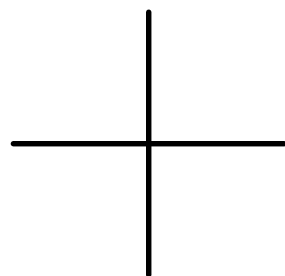
$\theta_r =$	$\sin x =$	$\csc x =$
	$\cos x =$	$\sec x =$
$\theta_{stp} =$	$\tan x =$	$\cot x =$

(-3,4)



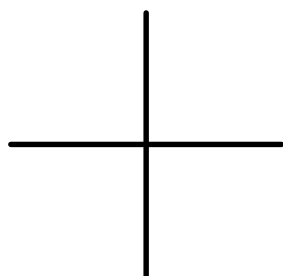
$\theta_r =$	$\sin x =$	$\csc x =$
	$\cos x =$	$\sec x =$
$\theta_{stp} =$	$\tan x =$	$\cot x =$

(2,3)



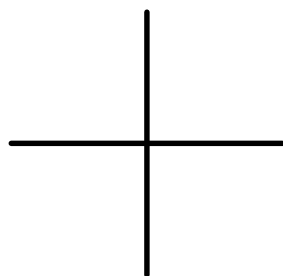
$\theta_r =$	$\sin x =$	$\csc x =$
	$\cos x =$	$\sec x =$
$\theta_{stp} =$	$\tan x =$	$\cot x =$

(5,-6)



$\theta_r =$	$\sin x =$	$\csc x =$
	$\cos x =$	$\sec x =$
$\theta_{stp} =$	$\tan x =$	$\cot x =$

(-5,12)

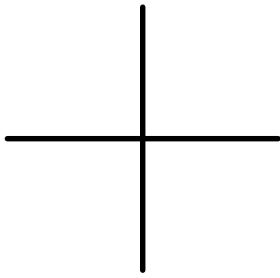


$\theta_r =$	$\sin x =$	$\csc x =$
	$\cos x =$	$\sec x =$
$\theta_{stp} =$	$\tan x =$	$\cot x =$

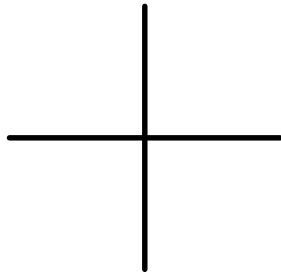
C12 - 4.3 - Solve $\csc\theta, \sec\theta, \cot\theta = ?$ HMK

Solve

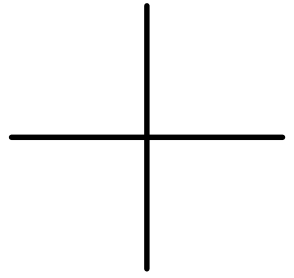
$$\cot \frac{\pi}{3} =$$



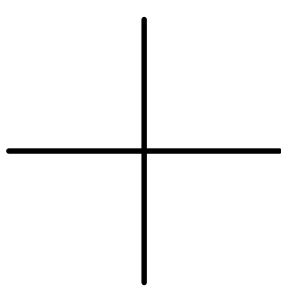
$$\sec \frac{5\pi}{4} =$$



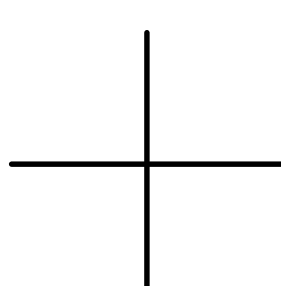
$$\sec \frac{11\pi}{6} =$$



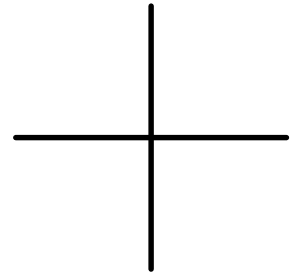
$$\sec \frac{4\pi}{3} =$$



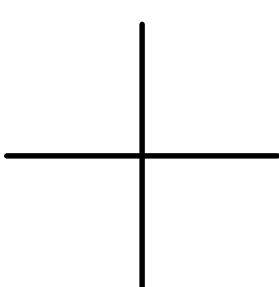
$$\csc \frac{\pi}{6} =$$



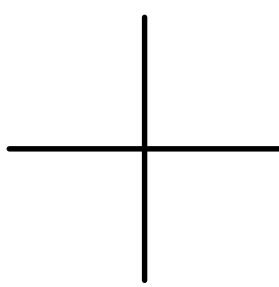
$$\cot \frac{5\pi}{6} =$$



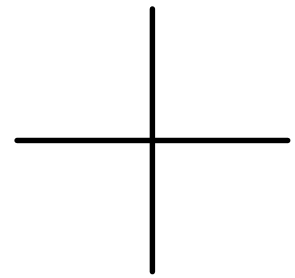
$$\csc \frac{7\pi}{4} =$$



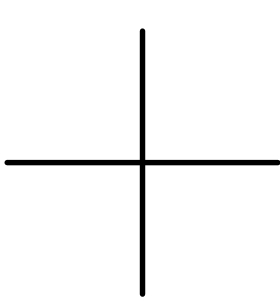
$$\cot \frac{\pi}{4} =$$



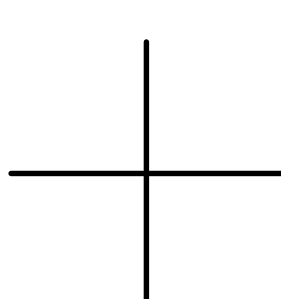
$$\sec \frac{3\pi}{4} =$$



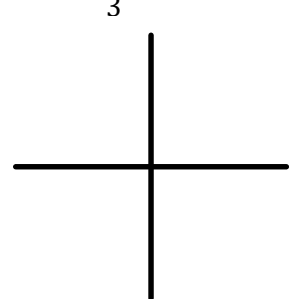
$$\sec \frac{5\pi}{3} =$$



$$\csc \frac{7\pi}{6} =$$



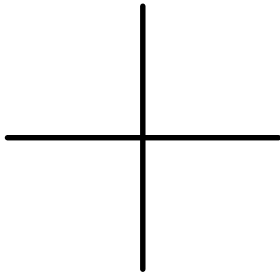
$$\cot \frac{2\pi}{3} =$$



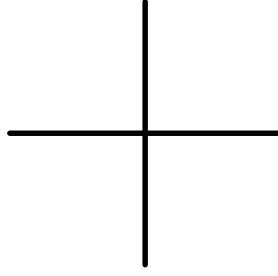
C12 - 4.3 - Solve $\csc x = 2$ HW

Solve for x , $0 \leq x < 2\pi$, answer should say $x =$

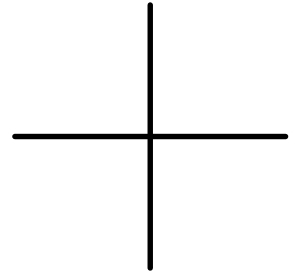
$$\sec x = 2$$



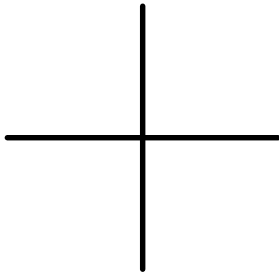
$$\csc x = -\frac{1}{\sqrt{2}}$$



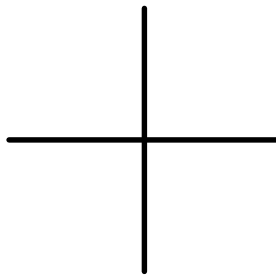
$$\cot x = -1$$



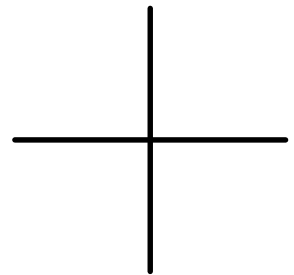
$$\csc x = \frac{\sqrt{3}}{2}$$



$$\cot x = \sqrt{3}$$



$$\sec x = -\sqrt{2}$$



$$\csc x = 2$$

$$\sec x = -2$$

$$\cot x = -\frac{1}{\sqrt{3}}$$

$$\csc x = -2$$

$$\cot x = -\sqrt{3}$$

$$\sin x = -\frac{\sqrt{3}}{2}$$

$$\cot x = 1$$

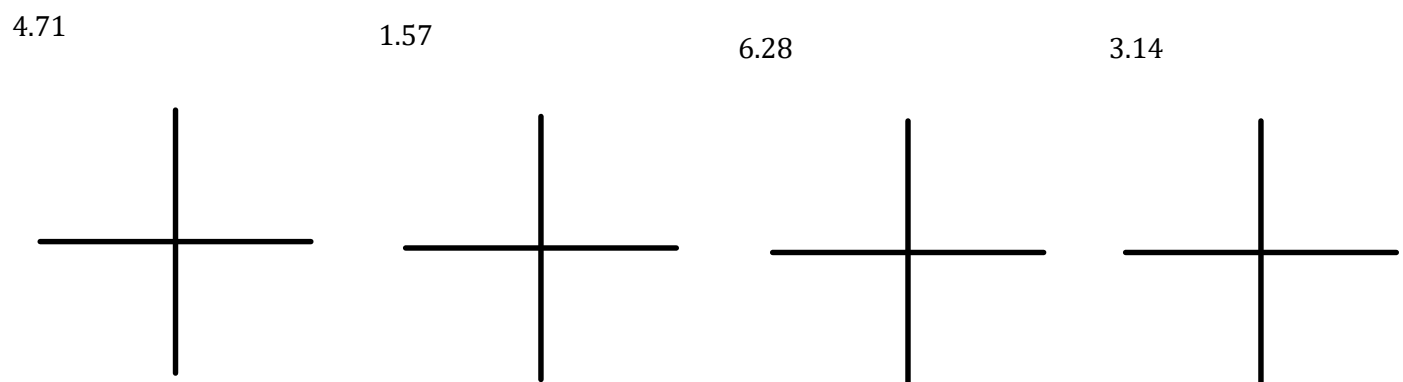
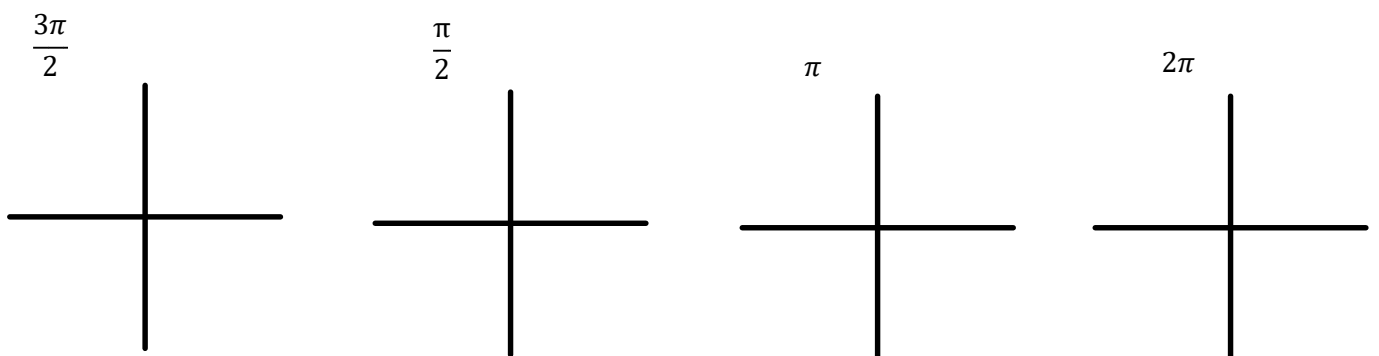
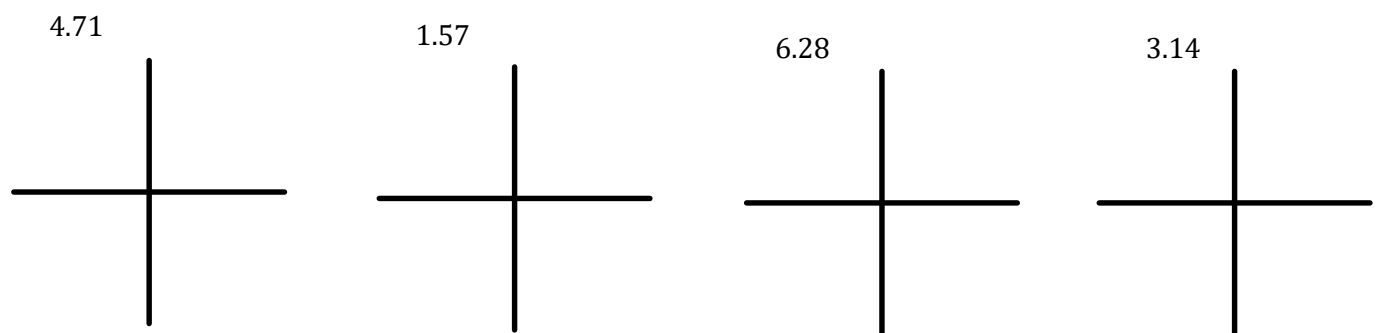
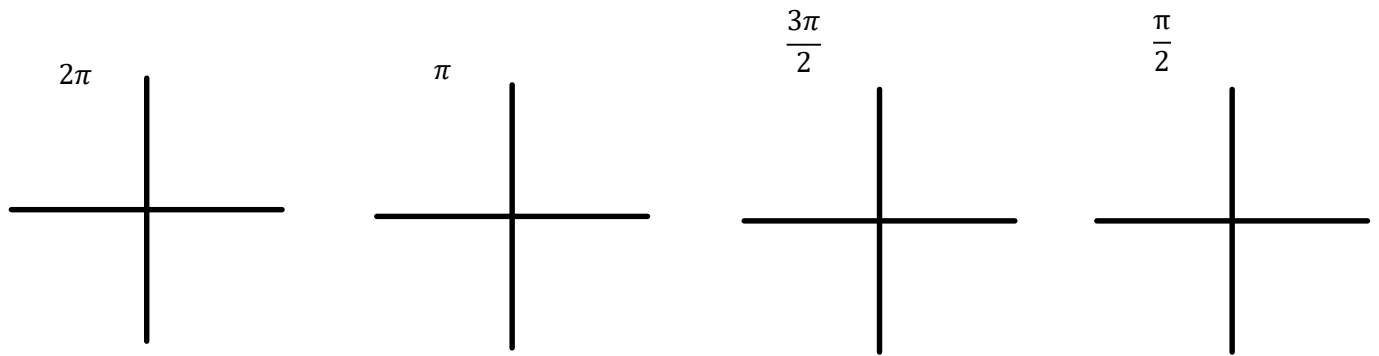
$$\sec x = -\frac{\sqrt{3}}{2}$$

$$\sec x = \frac{1}{\sqrt{2}}$$

$$\csc x = \frac{\sqrt{3}}{2}$$

C11 - 4.4 - Unit Circle Quadrantal Angle HW

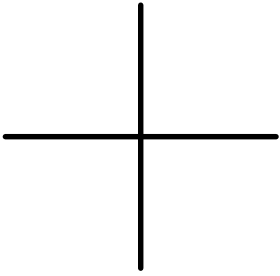
Sketch θ_{stp} , Label the point on the unit circle.



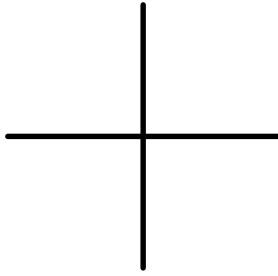
C12 - 4.4 - Solve $\sin\theta = ?$ HW

Solve.

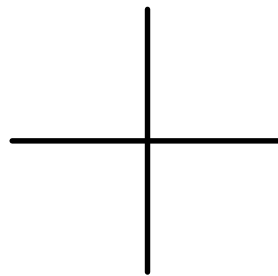
$$\sin 2\pi =$$



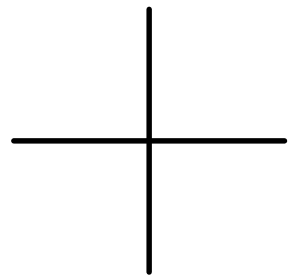
$$\cos \pi =$$



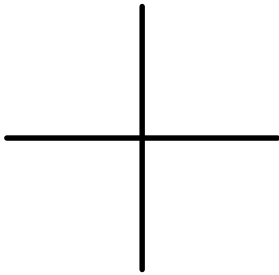
$$\tan \frac{3\pi}{2} =$$



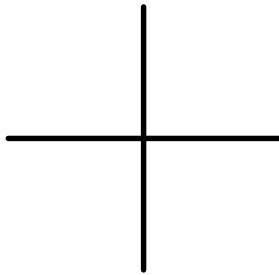
$$\sin \frac{\pi}{2} =$$



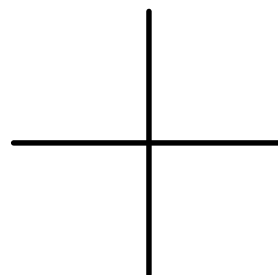
$$\cos 4.71 =$$



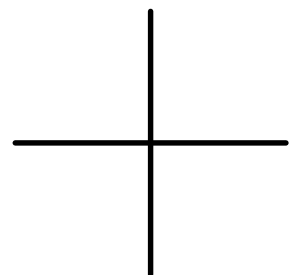
$$\csc 1.57 =$$



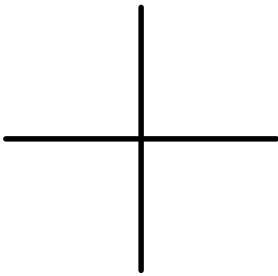
$$\tan 6.28 =$$



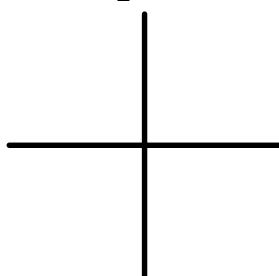
$$\sec 3.14 =$$



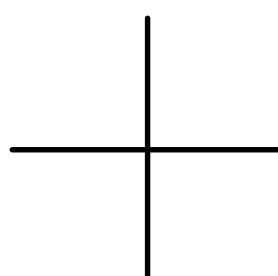
$$\csc \frac{3\pi}{2} =$$



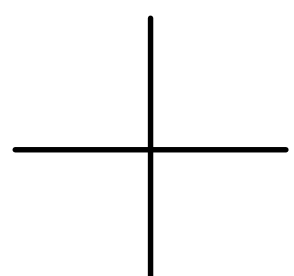
$$\cos \frac{\pi}{2} =$$



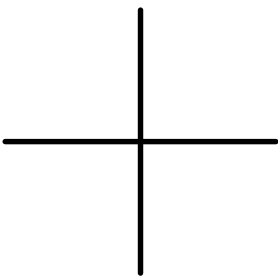
$$\cot \pi =$$



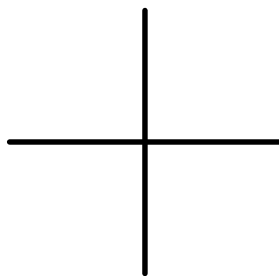
$$\cos 2\pi =$$



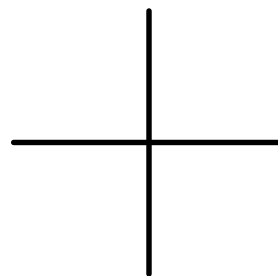
$$\sin 4.71 =$$



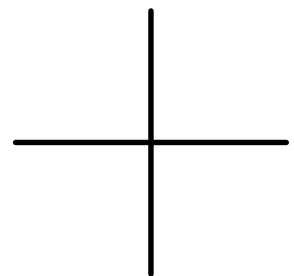
$$\cos 1.57 =$$



$$\tan 6.28 =$$



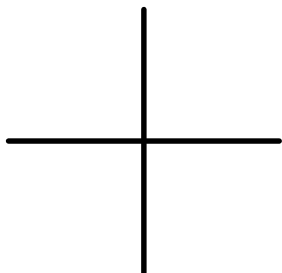
$$\cot 3.14 =$$



C12 - 4.4 - Point on Unit Circle HW

Find $\sin x$, $\cos x$, and $\tan x$ for the following points and θ stop.

(0,1)



$$\sin\theta =$$

$$\cos\theta =$$

$$\tan\theta =$$

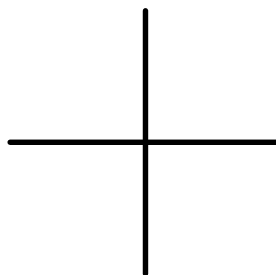
$$\csc\theta =$$

$$\sec\theta =$$

$$\cot\theta =$$

$$\theta_{stp} =$$

(1,0)



$$\sin\theta =$$

$$\cos\theta =$$

$$\tan\theta =$$

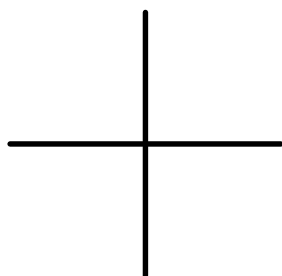
$$\csc\theta =$$

$$\sec\theta =$$

$$\cot\theta =$$

$$\theta_{stp} =$$

(0, -1)



$$\sin\theta =$$

$$\cos\theta =$$

$$\tan\theta =$$

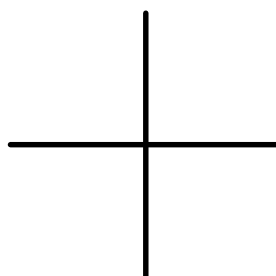
$$\csc\theta =$$

$$\sec\theta =$$

$$\cot\theta =$$

$$\theta_{stp} =$$

(-1,0)



$$\sin\theta =$$

$$\cos\theta =$$

$$\tan\theta =$$

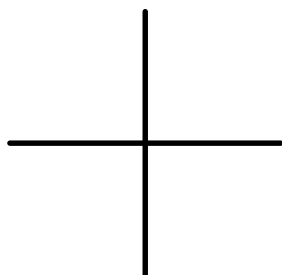
$$\csc\theta =$$

$$\sec\theta =$$

$$\cot\theta =$$

$$\theta_{stp} =$$

(0,3)



$$\sin\theta =$$

$$\cos\theta =$$

$$\tan\theta =$$

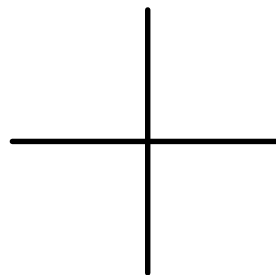
$$\csc\theta =$$

$$\sec\theta =$$

$$\cot\theta =$$

$$\theta_{stp} =$$

(-99,0)



$$\sin\theta =$$

$$\cos\theta =$$

$$\tan\theta =$$

$$\csc\theta =$$

$$\sec\theta =$$

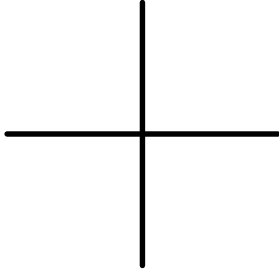
$$\cot\theta =$$

$$\theta_{stp} =$$

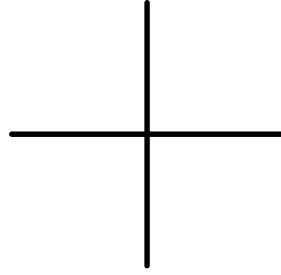
C12 - 4.4 - Unit Circle Trig Equations HW

Solve for θ , $0 \leq \theta < 2\pi$

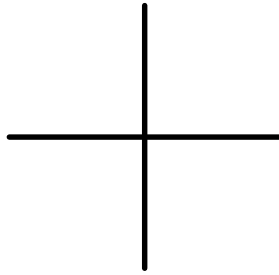
$$\sin\theta = 1$$



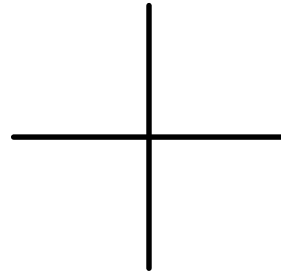
$$\cos\theta = 0$$



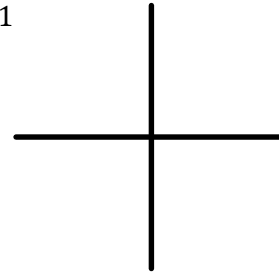
$$\csc\theta = 1$$



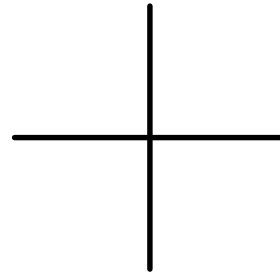
$$\cos\theta = -1$$



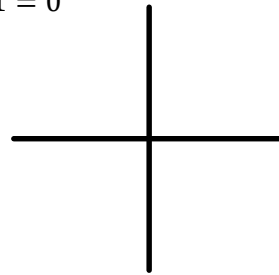
$$\sin\theta = -1$$



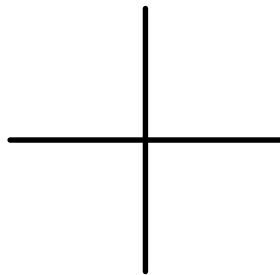
$$\cot\theta = \text{und}$$



$$\sin^2\theta - 1 = 0$$



$$\sec\theta = 0$$



C12 - 4.5 - $\sin 2\theta = \frac{1}{2}$ *ASTC Special Unit Decimal HW* $0 \leq \theta < 2\pi$

$$\cos\left(\frac{1}{2}x\right) = 0$$

$$\tan 2\theta = 1$$

$$\sin 2\theta = -0.4$$

$$\cos(2\theta) = 1$$

$$\sin\left(\frac{1}{2}\theta\right) = \frac{1}{2}$$

$$\tan 4\theta = 0.6$$

$$\tan 2\theta = 1$$

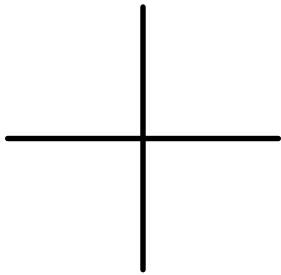
$$\cos\left(\frac{1}{2}\theta\right) = -\frac{1}{\sqrt{2}}$$

$$\sin 3\theta = 0.6$$

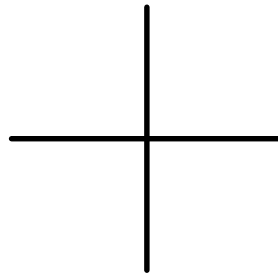
$$\sin 2\theta = \theta$$

C12 - 4.5 - Algebra Special Trig Decimal Equations HW

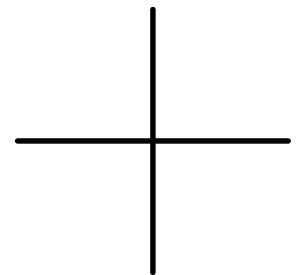
Solve for $x, 0 \leq x < 2\pi$



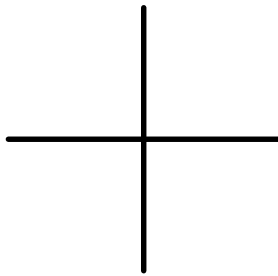
$$2\sin x = 1$$



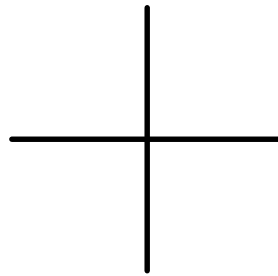
$$\sqrt{2}\cos x - 3 = -2$$



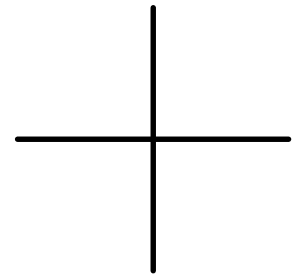
$$-2\sin x + 1 = 5$$



$$4\cos^2 x - 1 = 0$$



$$\sin x - \cos x = 0$$



$$-2\sin^2 x + 32 = 0$$

$$2\tan x = 2$$

$$2\cos x + 1 = 0$$

$$2\cos x = -\sqrt{3}$$

$$\tan^2 x = 1$$

$$4\sin^2 x - 1 = 2$$

$$-\sqrt{2}\sin x - 1 = 0$$

$$2\cos^2 x = 1$$

$$2\sin x = -\sqrt{3}$$

$$\tan x - 2 = -3$$

C12 - 4.5 - Period *HW*

$$0 \leq \theta < 2\pi$$

$$\cos(x - 2) = 0$$

$$\sin(2x - 2) = -\frac{1}{2}$$

$$\tan 2x = 0,2$$

$$\cos\left(\frac{\pi}{3}(x - 2)\right) = \frac{1}{2}$$

$$\sin\left(\frac{\pi}{2}(x - 1)\right) - 1 = 1$$

$$\tan\left(\frac{\pi}{4}(x - 6)\right) = 5$$

$$2 \cot(2\pi - 1) = -3.8$$

$$\cos\left(\frac{\pi}{6}\left(x - \frac{\pi}{3}\right)\right) = 0.2$$

$$2 \tan\left(2\left(x - \frac{\pi}{2}\right)\right) + 3 = 1$$

$$\cot(1.2x) = 7$$

C12 - 4.6 - Equations Algebra HW

$$3\sin x = 2 - \sin x$$

$$1 - \cos x = 4\cos x$$

$$-3 + 2\sin x = 7\sin x - 1$$

$$\frac{\tan x + 1}{\tan x} = 2$$

$$2\cos x = 4$$

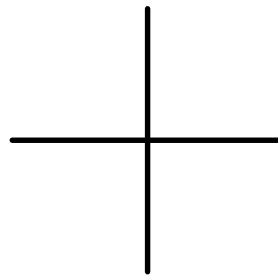
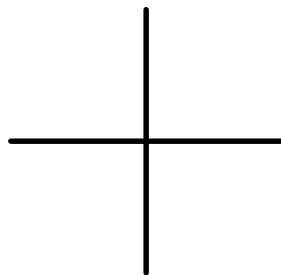
$$7 - 3\sec x = 2$$

$$\cos x = \sec x$$

C12 - 4.6 - Factoring Equations HW

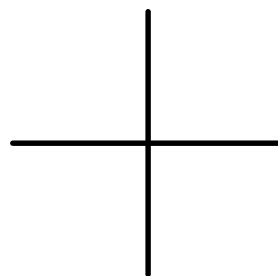
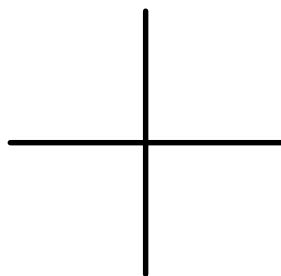
Solve for x , $0 \leq x < 2\pi$, by factoring, then setting factors equal to zero and solve.

$$\sin^2 x - \sin x = 0$$



0,1

$$2 \sin^2 x + \sin x - 1 = 0$$



$\frac{1}{2}, -1$

$$\cos^2 x - \cos x - 2 = 0$$

$$\sin^2 x + \sin x - 2 = 0$$

$$2 \cos^2 x - \cos x - 1 = 0$$

$$\cos^2 x + \cos x = 0$$

$$2 \cos^2 x - 6 \cos x - 7 = 0$$

$$3 \sin^2 x + 5 \sin x - 2 = 0$$

$$\cos x + 1 - 2 \sec x = 0$$

$$\tan x = 2 \cot x - 1$$

$$2 \sin x = 3 \tan^2 x$$

Polynomial!

C12 - 4.7 - NPVs WS *Denominator ≠ 0*

Determine the non-permissible values of x in radians, for the following expressions.

$$\frac{1}{\sin x}$$

$$\frac{\sin x}{\cos x}$$

$$\frac{\cos x}{1 - \sin x}$$

$$\csc x$$

$$\frac{\tan x}{\sin x}$$

$$\frac{1}{\csc x}$$

$$\frac{1}{\cos \theta - \frac{1}{2}}$$

$$\frac{1}{\tan x}$$

$$\frac{\csc x}{\tan x}$$

$$\frac{\cot x}{\tan x}$$

$$\frac{\tan x}{x}$$

$$\frac{1}{\cos^2 x}$$

$$\frac{1}{1 - \sin^2 x}$$

$$\frac{1}{\tan \theta - 1}$$

$$\frac{1}{\sin \theta - \frac{1}{\sqrt{2}}}$$

$$\frac{\cos x}{5}$$

$$\frac{1}{\sin x - \cos x}$$

$$\frac{1}{\sin x - \tan x}$$

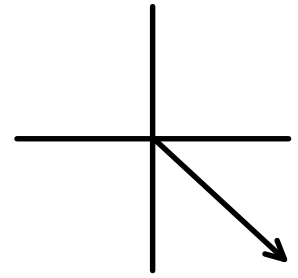
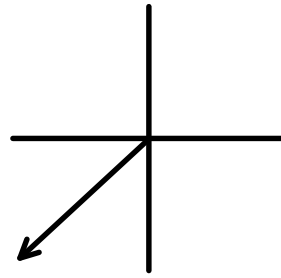
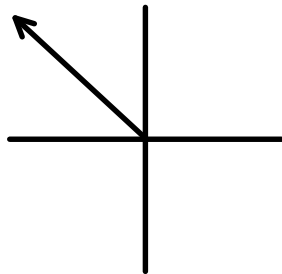
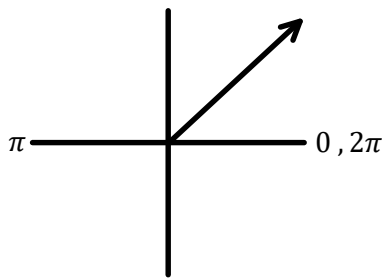
$$\frac{1}{\cos^2 x + 1}$$

$$\frac{1}{\cos^2 x + \cos x - 2}$$

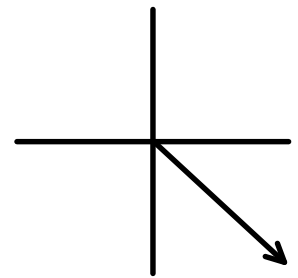
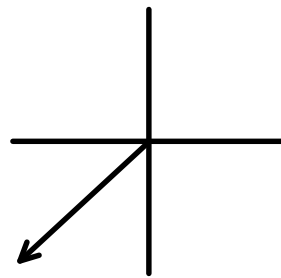
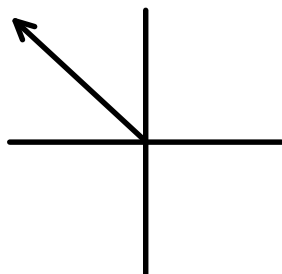
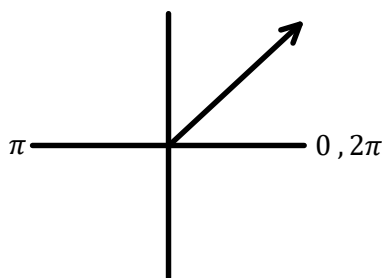
C12 - 4.7 - Domain Change HMK

Draw θ_{stp} Arrows within the Domain

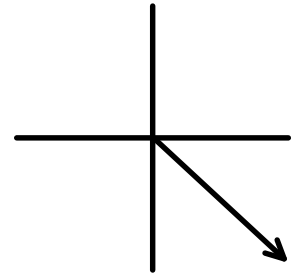
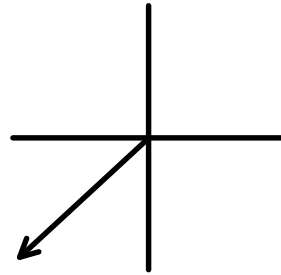
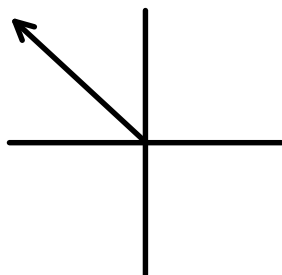
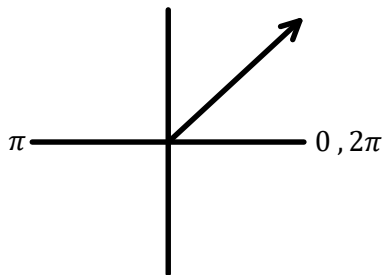
$$0 \leq \theta < 2\pi$$



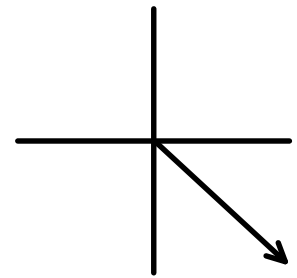
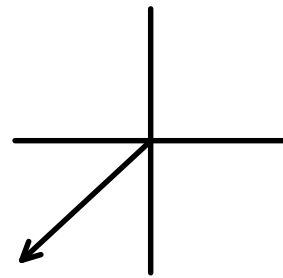
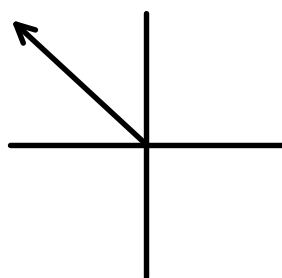
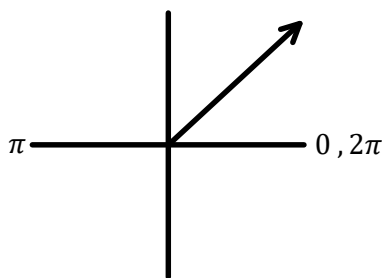
$$-\pi \leq \theta < 0$$



$$-\frac{\pi}{2} \leq \theta < \frac{\pi}{2}$$

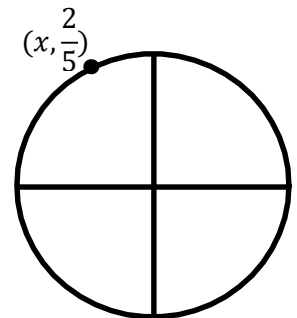
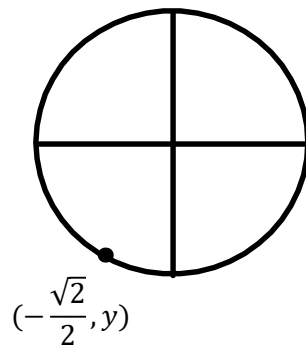
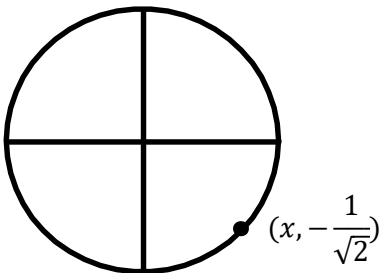
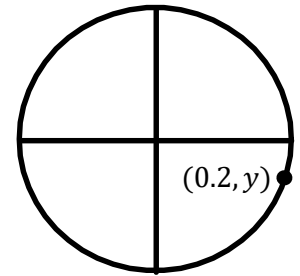
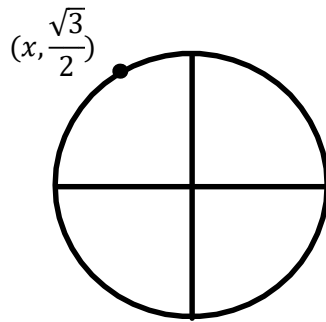
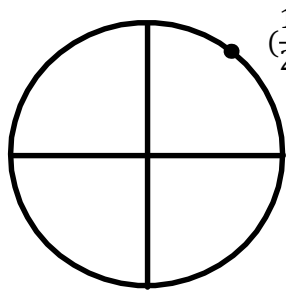


$$0 \leq \theta < 4\pi$$



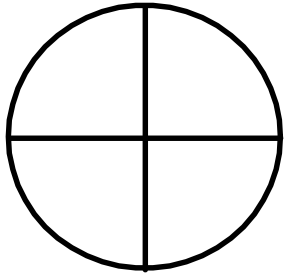
C12 - 4.8 - Solve (x,y) Unit Circle HMK

Find the missing value of the point on the unit circle

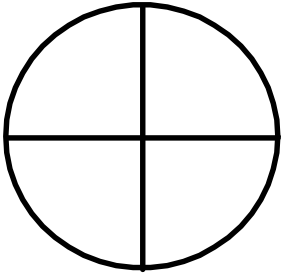


C12 - 4.8 - $P(\theta) = ?$ Solve (x,y) Unit Circle HMK


Solve the point on the unit circle




$$p\left(\frac{\pi}{3}\right) =$$




$$p\left(\frac{\pi}{6}\right) =$$



$$p\left(\frac{\pi}{4}\right) =$$



$$p\left(\frac{4\pi}{3}\right) =$$



$$p\left(\frac{5\pi}{6}\right) =$$

C12 - 4.9 - Arc Length, Central Angle HW

Don't forget to draw and label the circle!

What is the arc length of a circle with:

A radius of 1 and an angle of 45° ?

A radius of 5 and an angle of 60° ?

A radius of 4 and an angle of 180° ?

What is the arc length of a circle with:

A radius of 1 and an angle of $\frac{\pi}{4}$?

A radius of 5 and an angle of π ?

A radius of 4 and an angle of $\frac{3\pi}{2}$?

What is the central in radians angle with:

A radius of 1 and an arc length of 1?

A radius of 3 and an arc length of 2?

A radius of 5 and an arc length of 12?

C12 - 4.9 - Radius, Sector Area HW

Don't forget to draw and label the circle!

What is the radius of a circle with:

An arc length of 3 and
a central angle of $\frac{\pi}{3}$?

An arc length of 2 and
a central angle of $\frac{\pi}{4}$?

An arc length of 5 and
a central angle of π ?

What is the sector area of a circle with:

A radius of 1 and an arc
length of 1?

A radius of 3 and an arc
length of 2?

A radius of 5 and an arc
length of 12?