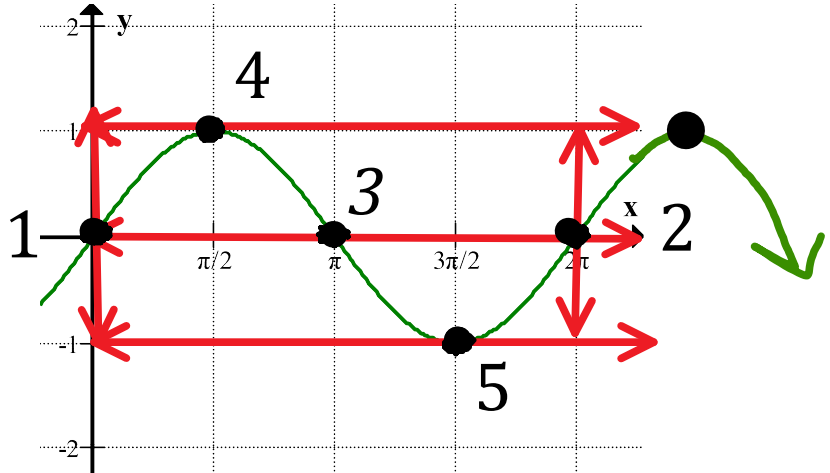


C12 - 5.1 - TOV Radians sinx,cosx,tanx TOV Graphs Notes

$y = \sin x$

x	y
0	0
$\frac{\pi}{2}$	1
π	0
$\frac{3\pi}{2}$	-1
2π	0

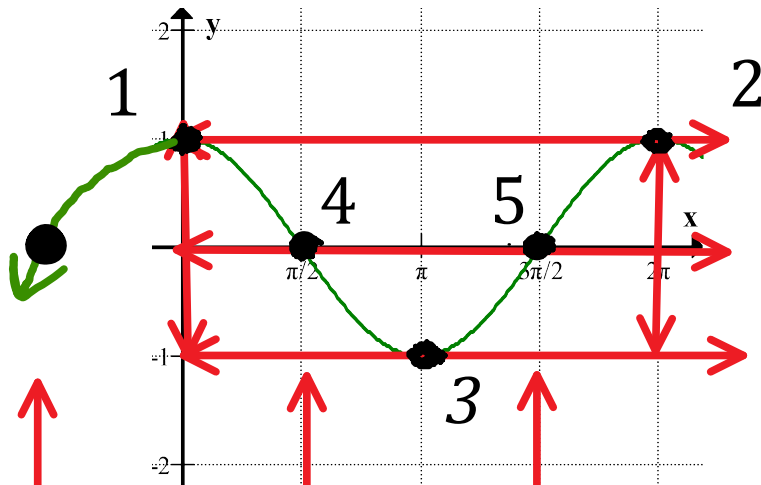
Pt.
(0,0)
$(\frac{\pi}{2},1)$
$(\pi,0)$
$(\frac{3\pi}{2},-1)$
$(2\pi,0)$



$y = \cos x$

x	y
0	1
$\frac{\pi}{2}$	0
π	-1
$\frac{3\pi}{2}$	0
2π	1

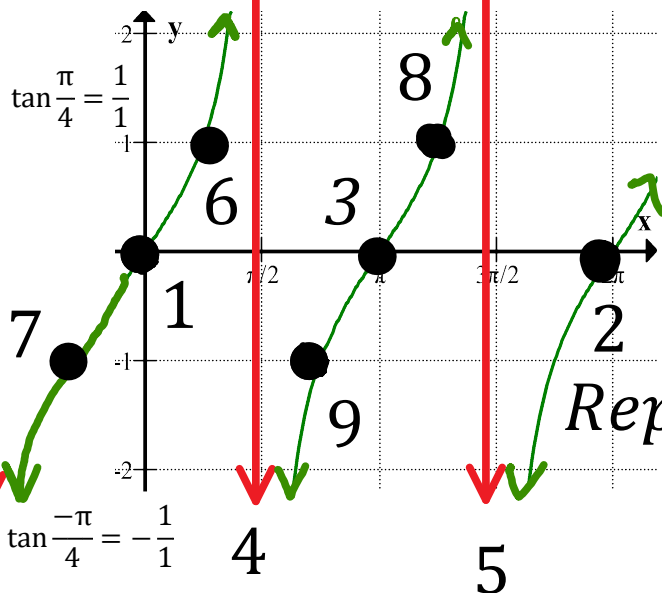
Pt.
(0,1)
$(\frac{\pi}{2},0)$
$(\pi,-1)$
$(\frac{3\pi}{2},0)$
$(2\pi,1)$



$y = \tan x$

x	y
0	0
$\frac{\pi}{4}$	1
$\frac{\pi}{2}$	und
$\frac{3\pi}{4}$	-1
π	0

Pt.
(0,0)
$(\frac{\pi}{4},1)$
$(\frac{\pi}{2}, \text{und})$
$(\frac{3\pi}{4}, -1)$
$(\pi, 0)$



$\tan x = \frac{\sin x}{\cos x}$

x	y
$\frac{\pi}{4}$	1
$-\frac{\pi}{4}$	-1

Special Triangles
ASTC

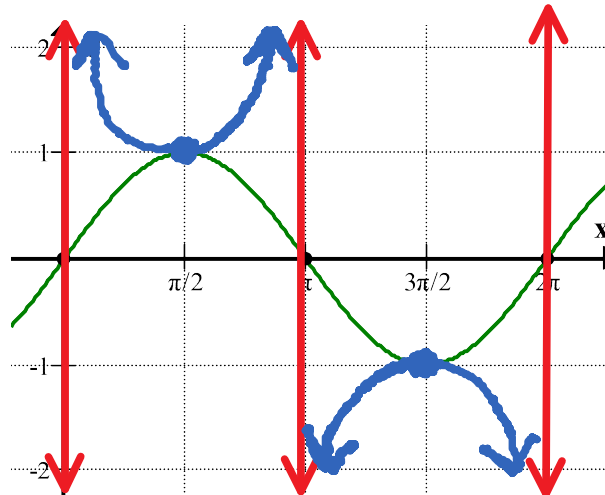
Tan is Zero when sin is zero
Tan is UND when cos is zero

C12 - 5.1 - TOV Radians $\csc x, \sec x, \cot x$ TOV Graphs Notes

$y = \csc x$

x	y
0	und
$\frac{\pi}{2}$	1
π	und
$\frac{3\pi}{2}$	-1
2π	und

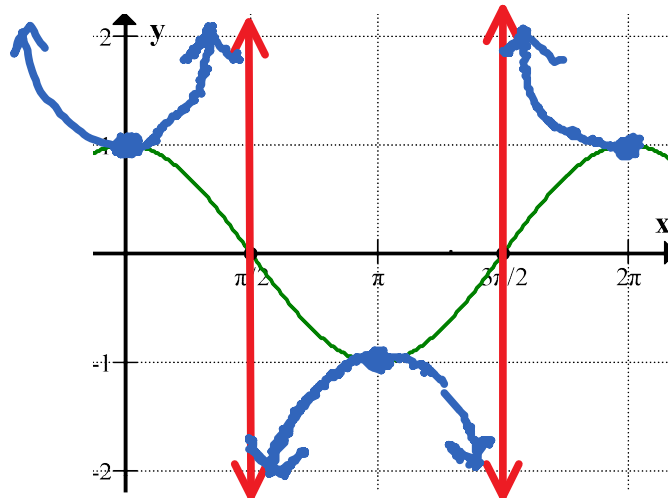
Pt.
(0,0)
$(\frac{\pi}{2}, 1)$
$(\pi, 0)$
$(\frac{3\pi}{2}, -1)$
$(2\pi, 0)$



$y = \sec x$

x	y
0	1
$\frac{\pi}{2}$	und
π	-1
$\frac{3\pi}{2}$	und
2π	1

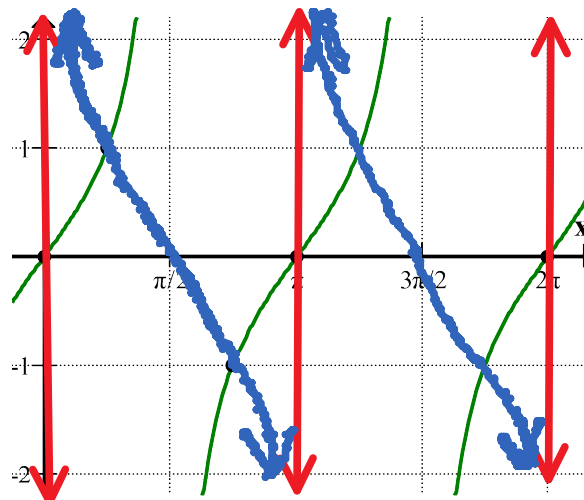
Pt.
(0,1)
$(\frac{\pi}{2}, 0)$
$(\pi, -1)$
$(\frac{3\pi}{2}, 0)$
$(2\pi, 1)$



$y = \cot x$

x	y
0	und
$\frac{\pi}{4}$	1
$\frac{\pi}{2}$	0
$\frac{3\pi}{4}$	-1
π	und

Pt.
(0,0)
$(\frac{\pi}{4}, 1)$
$(\frac{\pi}{2}, \text{und})$
$(\frac{3\pi}{4}, -1)$
$(\pi, 0)$



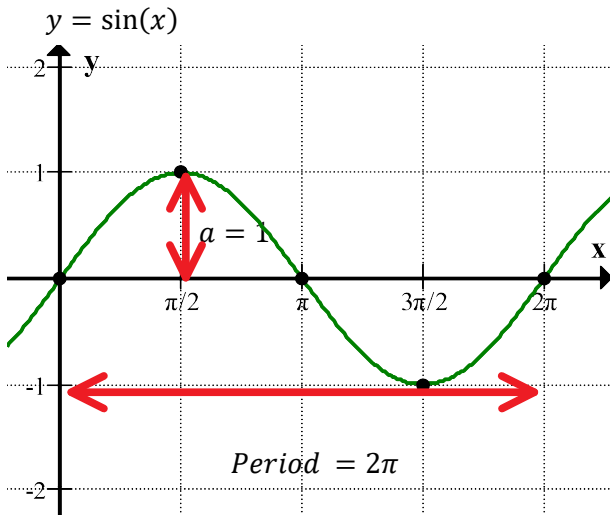
Cot is Zero when cos is zero
Cot is UND when sin is zero

$$\cot x = \frac{\cos x}{\sin x}$$

C12 - 5.2 - (a,b) Sine Transformations Notes

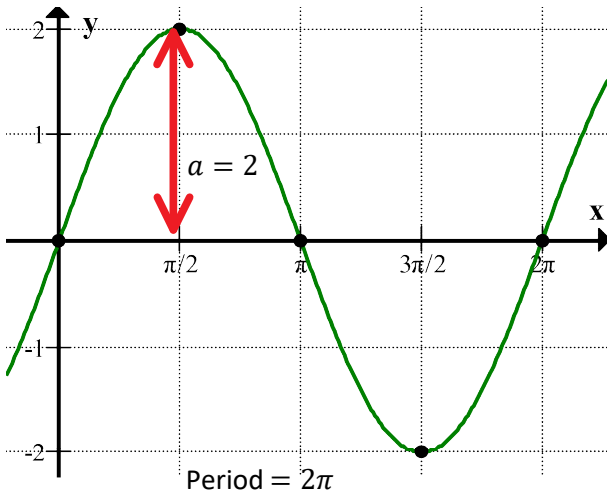
$$y = a \sin(b(x - c)) + d$$

Amplitude \rightarrow a
 Period $= \frac{2\pi}{b}$ \rightarrow b
 Phase Shift \rightarrow $(x - c)$
 Center Line \rightarrow d



Amplitude Change

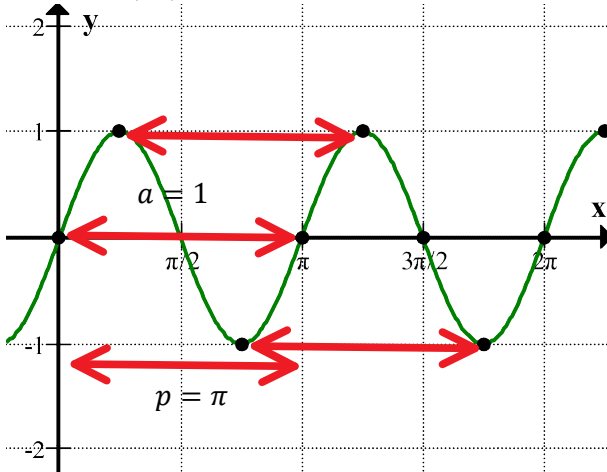
$y = 2 \sin(x)$



$VE = 2$

Period Change

$y = \sin(2x)$



$HC = \frac{1}{2}$

$$p = \frac{2\pi}{b}$$

$$p = \frac{2\pi}{2}$$

$$p = \pi$$

C12 - 5.3 - (d,c) Sinusoidal Transformations Notes

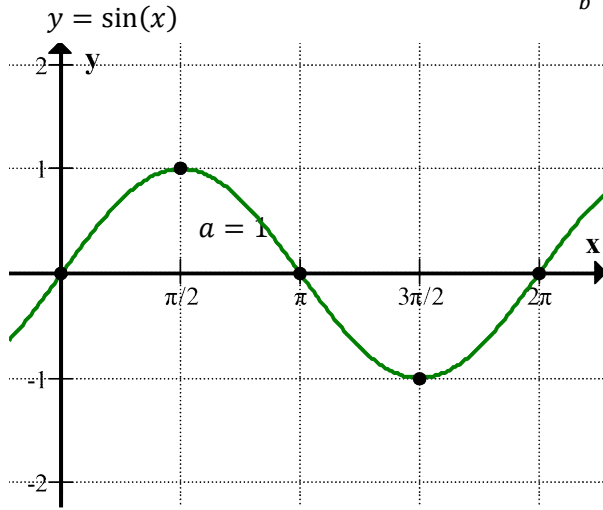
$$y = a \sin(b(x - c)) + d$$

Amplitude

Period = $\frac{2\pi}{b}$

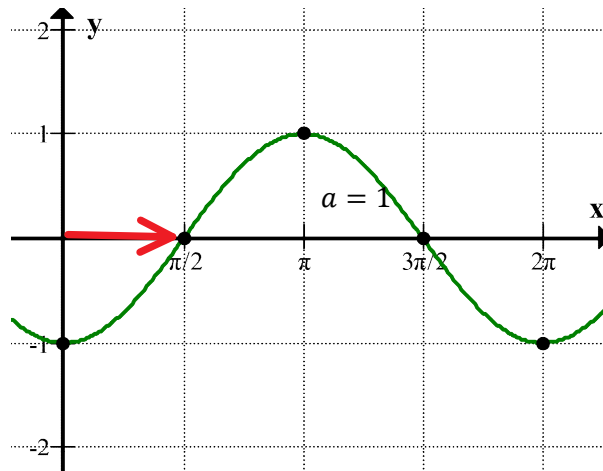
Phase Shift

Center Line



Phase Shift

$$y = \sin\left(x - \frac{\pi}{2}\right)$$

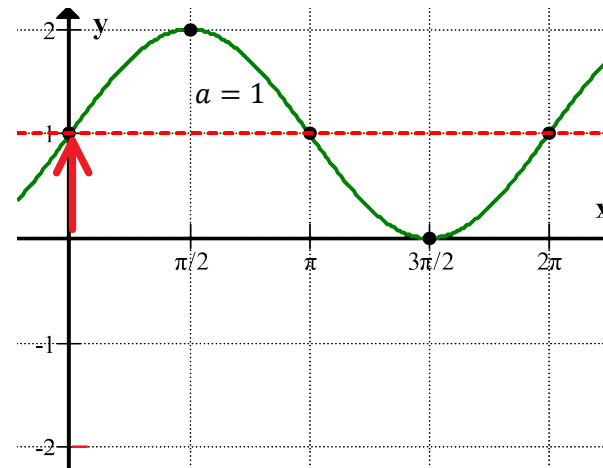


$$HT = \frac{\pi}{2}$$

Phase shift $\frac{\pi}{2}$ units to the right

Center Line Shift

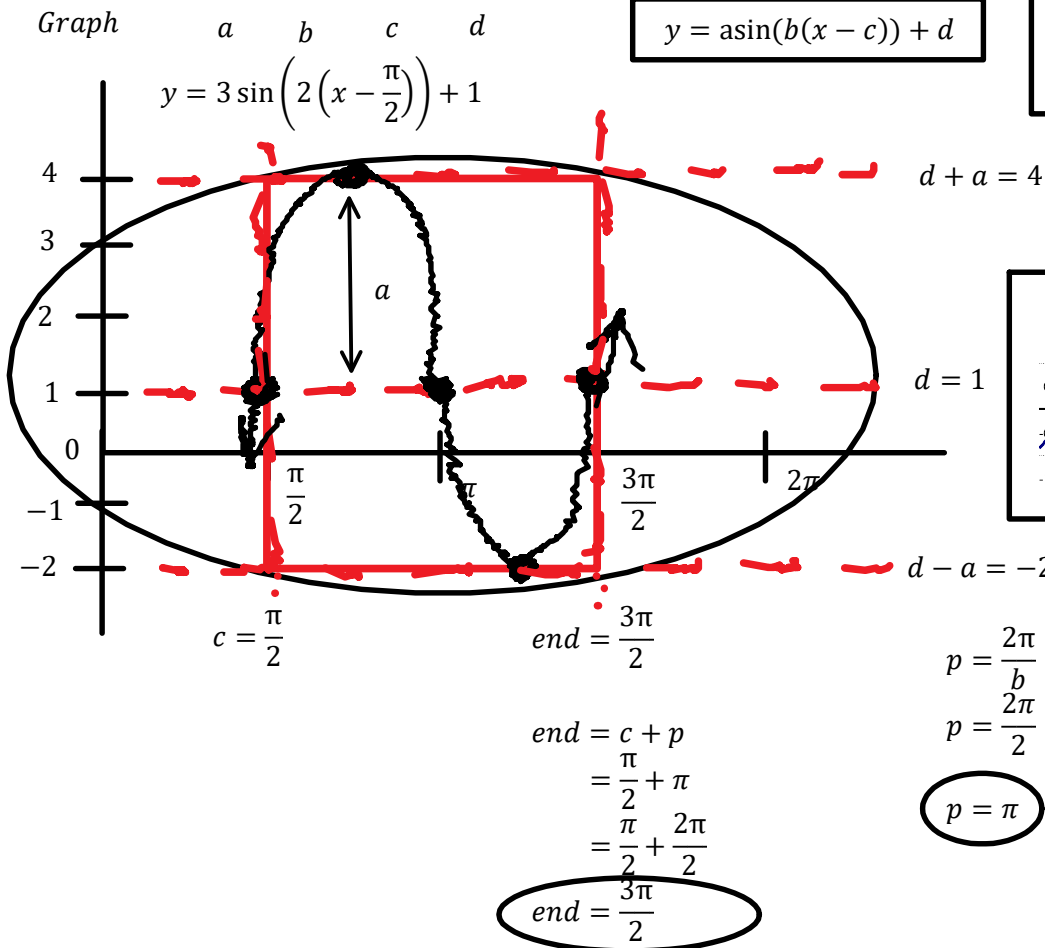
$$y = \sin(x) + 1$$



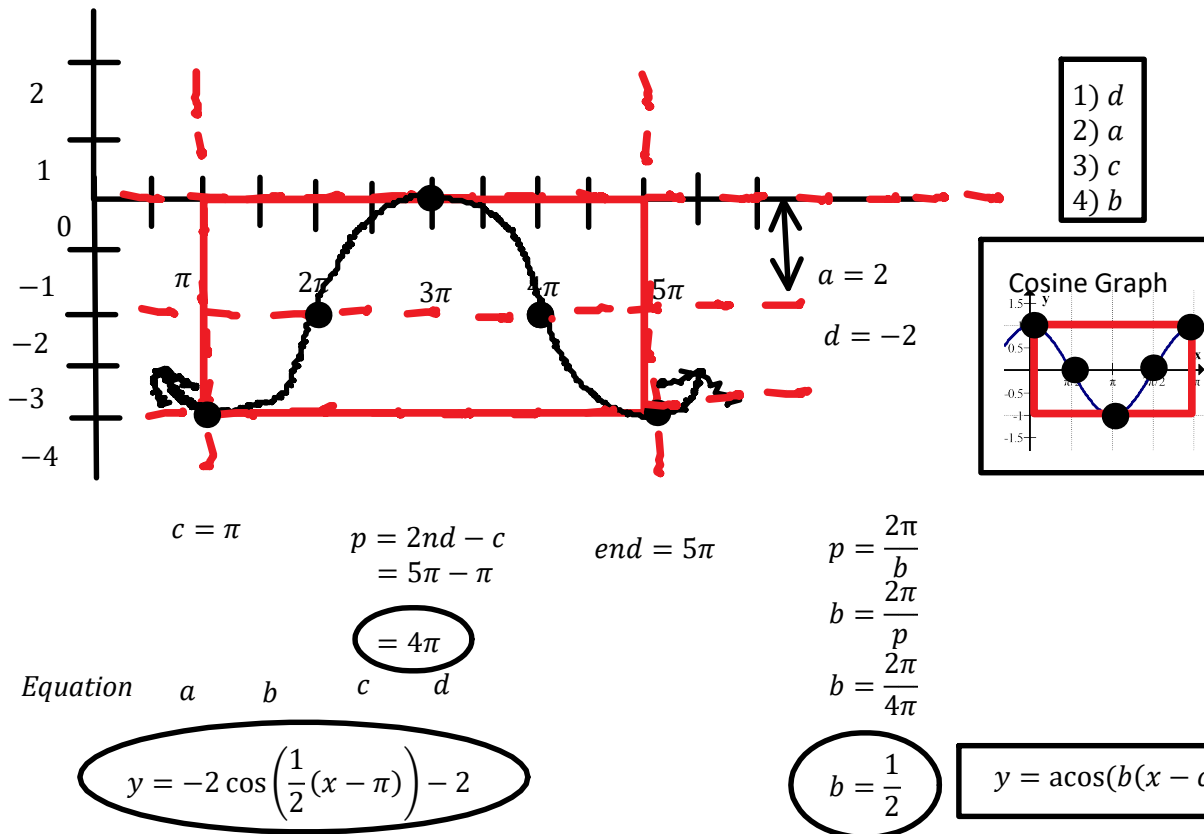
$$VT = +1$$

up 1

C12 - 5.4 - Trig Graphing Notes

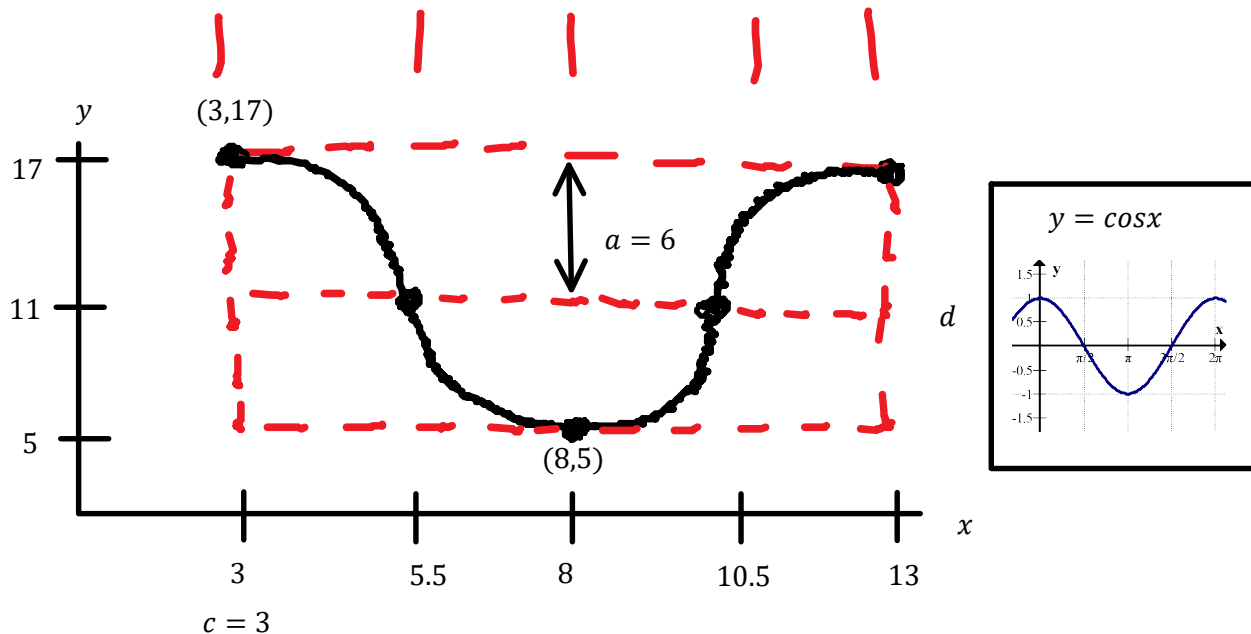


Find Equation



C12 - 5.4 - Max Min Points Notes

A sinusoidal function has a maximum at (3,17) and a minimum at (8,5). Find the equation.



$$\frac{17 + 5}{2} = 11$$

$$\frac{17 - 5}{2} = 6$$

$$8 - 3 = 5$$

$$5 \times 2 = 10$$

$$p = 10$$

$$\begin{aligned} 17 - 6 &= 11 \\ 5 + 6 &= 11 \end{aligned}$$

$$\frac{5}{2} = 2.5$$

$$3 + 2.5 = 5.5$$

$$y = a \cos(b(x - c)) + d$$

$$y = 6 \cos\left(\frac{\pi}{5}(x - 3)\right) + 11$$

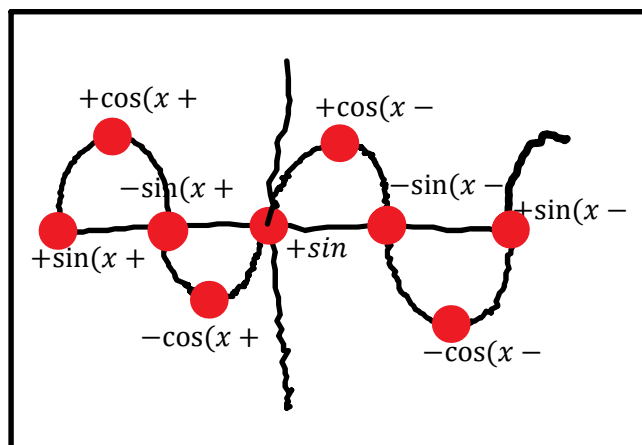
$$\begin{aligned} p &= \frac{2\pi}{b} \\ b &= \frac{2\pi}{p} \\ b &= \frac{2\pi}{10} \\ b &= \frac{\pi}{5} \end{aligned}$$

$$y = 6 \sin\left(\frac{\pi}{5}(x - 10.5)\right) + 11$$

$$y = -6 \sin\left(\frac{\pi}{5}(x - 5.5)\right) + 11$$

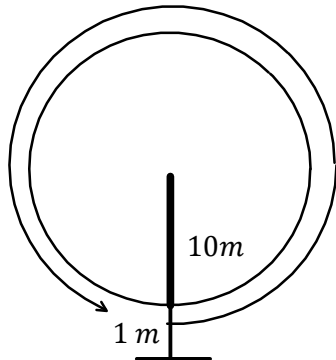
$$y = -6 \cos\left(\frac{\pi}{5}(x - 8)\right) + 11$$

$\pm \sin/\cos$ and "c"



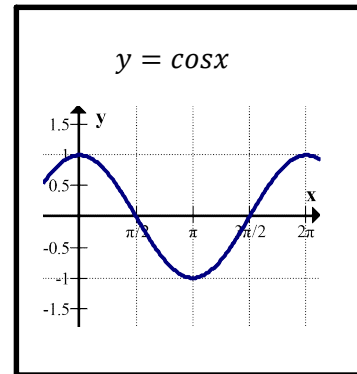
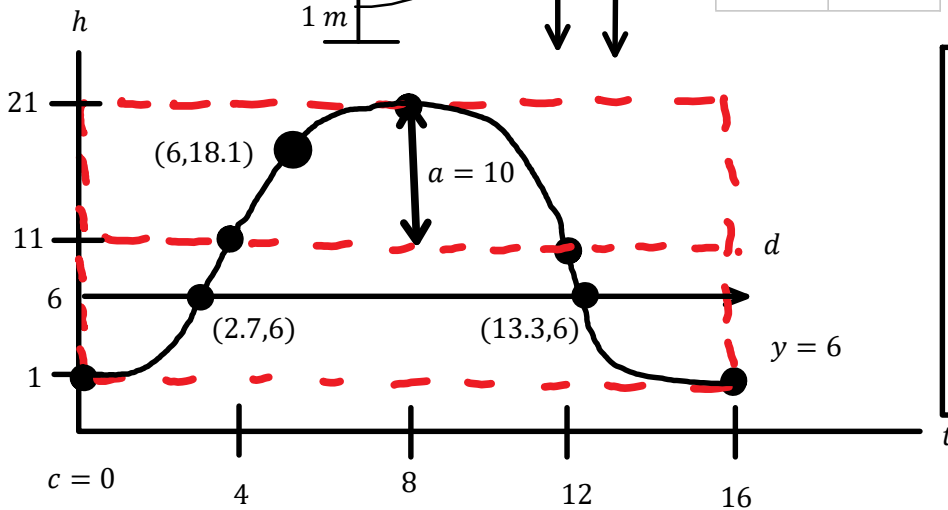
C12 - 5.5 - Ferris Wheel Notes

A Ferris wheel with radius 10 m is 1 m off the ground. It takes 16 seconds for one complete revolution. Draw a diagram of the Ferris wheel, graph the height of a passenger starting at the bottom and write the sinusoidal equation. How high 6 at second? How long above 6m in one cycle? No Calculator!



t	h
0	1
4	11
8	21
12	11
16	1

$$\frac{16}{4} = 4$$



$$y = a \cos(b(x - c)) + d$$

$$h = -10 \cos\left(\frac{\pi}{8}(t)\right) + 11$$

$$p = \frac{2\pi}{b}$$

$$b = \frac{2\pi}{p}$$

$$b = \frac{2\pi}{16}$$

$$b = \frac{\pi}{8}$$

$p = 16$ seconds

$$h = +10 \sin\left(\frac{\pi}{8}(t - 4)\right) + 11$$

$$h = -10 \cos\left(\frac{\pi}{8}(6)\right) + 11$$

$$h = 18.1m$$

Sub 6 in for t. Or. Graph and 2nd Calc Value

$$\frac{10 + 11\sqrt{2}}{\sqrt{2}} = 18.1 \quad \text{Exact Value}$$

$$y_1 = -10 \cos\left(\frac{\pi}{8}(t)\right) + 11$$

$$y_2 = 6$$

$$10.7 \text{ seconds}$$

Find Intersection, and Subtract, (or Algebra and Inverse)

$$13.333 - 2.666 = 10.666$$

$$6 = -10 \cos\left(\frac{\pi}{8}(t)\right) + 11$$

$$\cos m = \frac{1}{2} \quad m = \frac{\pi t}{8}$$

$$t = \frac{8}{3}, \frac{40}{3} \quad \text{Exact Value}$$

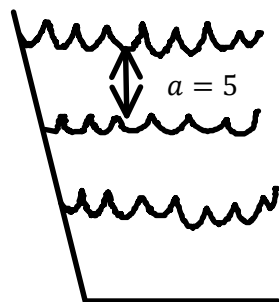
C12 - 5.5 - Tide Notes

$$\frac{24 \text{ min}}{60 \text{ min}} = 0.4 \text{ hr}$$

Graph and find Equation. High tide depth 18m at 8 am. Low tide depth 8 m at 1:24 pm.

(8,18)

(13.4,8)



$d = 18 \text{ m}$

$d = 13$

$d = 8 \text{ m}$

t	h
8	18
10.7	13
13.4	8
16.1	13
18.8	18



$$\frac{8 + 13.4}{2} = 10.7$$

$$\frac{8 + 18}{2} = 13$$

$$\frac{13.4 - 8}{2} = 2.7$$

$$\frac{18 - 8}{2} = 5$$

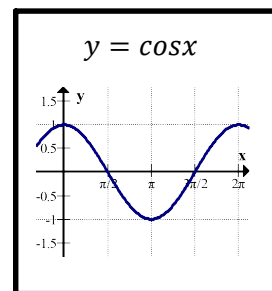
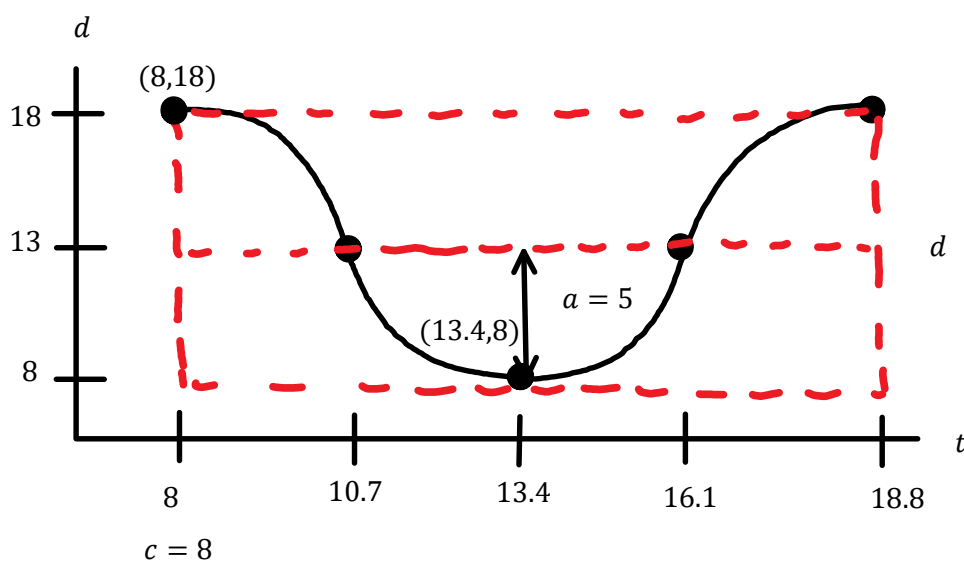
$$8 + 2.7 = 10.7$$

$$13.4 + 2.7 = 16.1$$

$$16.1 + 2.7 = 18.8$$

$$18 - 5 = 13$$

$$8 + 5 = 13$$



$$y = a \cos(b(x - c)) + d$$

$$d = +10 \cos\left(\frac{\pi}{5.4}(x - 8)\right) + 13$$

$$p = \frac{2\pi}{b}$$

$$b = \frac{2\pi}{p}$$

$$b = \frac{2\pi}{10.8}$$

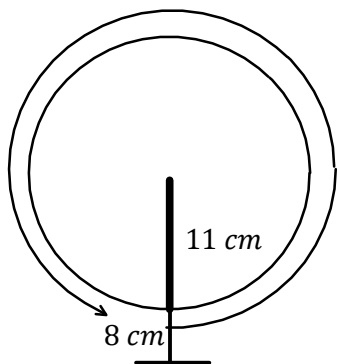
$$b = \frac{\pi}{5.4}$$

$$p = 18.8 - 8 = 10.8$$


(13.4,8)

C12 - 5.5 - Bike Pedal Notes

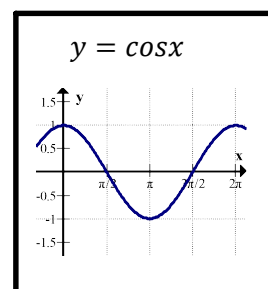
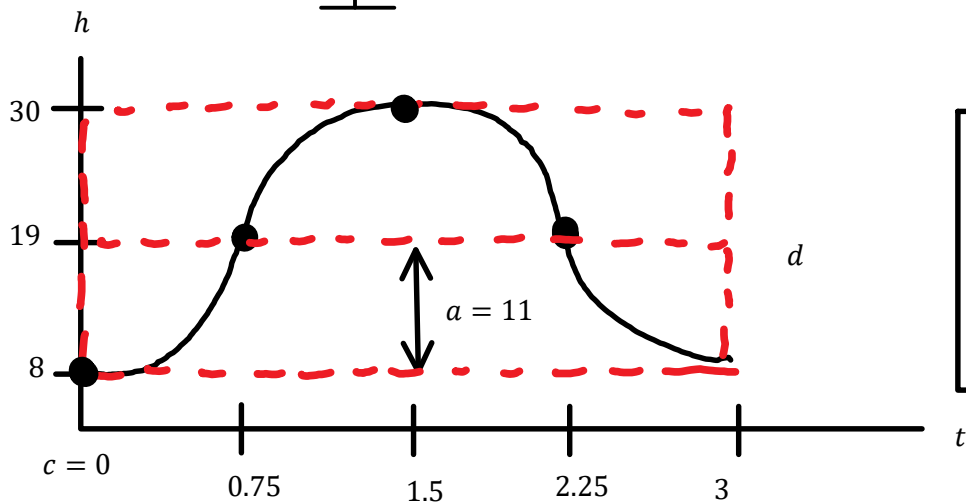
A bicycle pedal does 20 revolutions per minute and has a radius of 11 cm and the 8 cm off the ground at its lowest point. Find the sinusoidal equation.



t	h
0	8
0.75	19
1.5	30
2.25	19
3	8



$$\frac{3}{4} = 0.75$$



$$y = a \cos(b(x - c)) + d$$

$$h = -11 \cos\left(\frac{2\pi}{3}(t)\right) + 19$$

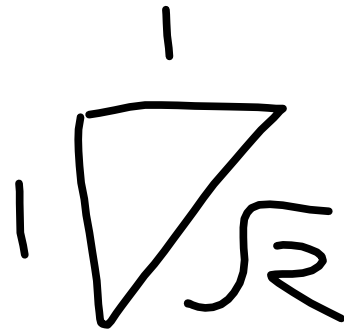
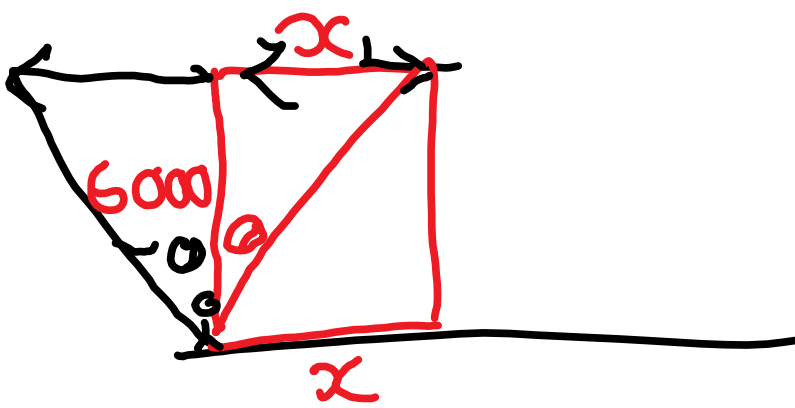
$$p = \frac{2\pi}{b}$$

$$b = \frac{2\pi}{3}$$

$$\frac{20 \text{ rev}}{\text{min}} = \frac{20 \text{ rev}}{60 \text{ s}} = \frac{1 \text{ rev}}{3 \text{ s}}$$

$$\text{Period} = 3 \text{ s}$$

C12 - 5.5 - Trig Plane Overhead Notes



θ	x
0	0
$\frac{\pi}{4}$	6000
$\frac{\pi}{8}$	2485
$\frac{3\pi}{8}$	14485

$\tan \theta = \frac{0}{9}$
 $\cot \theta = \frac{x}{6000}$
 $x = 6000$

