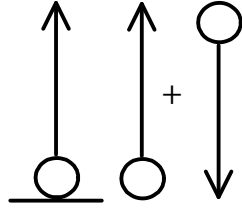
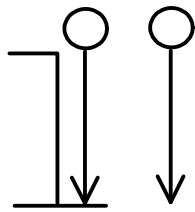
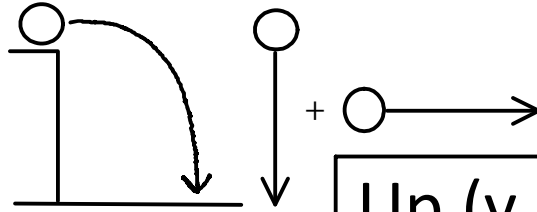
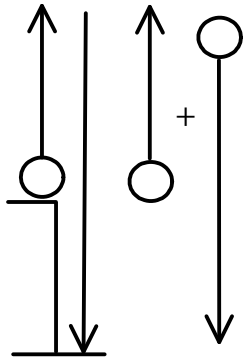


$\circ \longrightarrow \circ$ Over ; $a = ?$



Up
Down



Up ($y, a = -9.8$)
Down ($y, a = -9.8$)
Over ($x, a = 0$)

