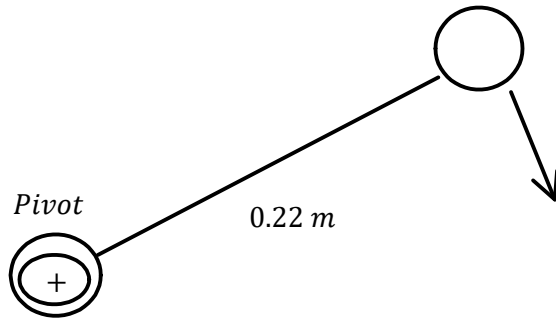
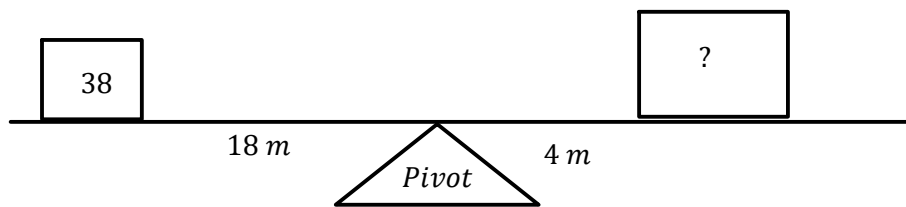


# P12 - 4.1 - Torque Equilibrium HMK

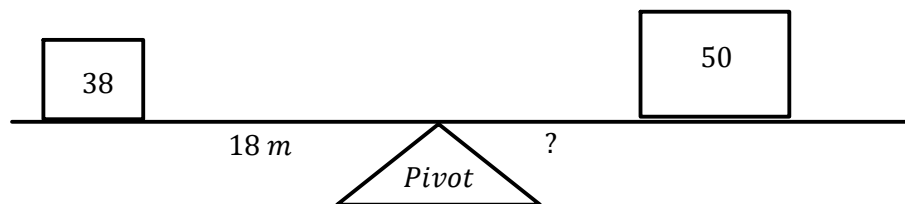
How much Torque can a 100 N force do on a 0.15 m wrench?



Find the mass so the system is in equilibrium?

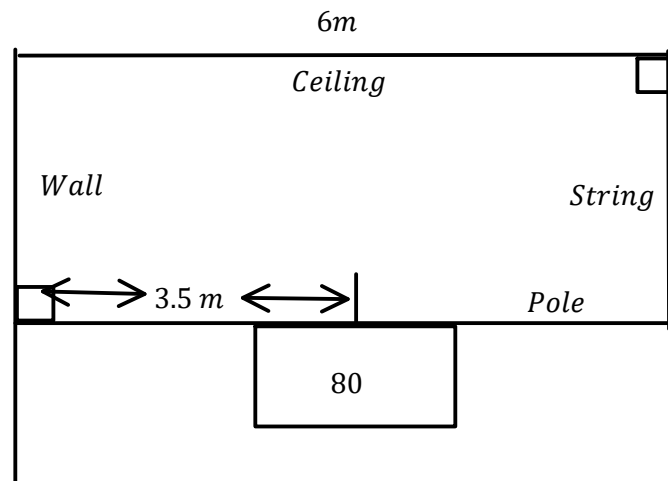


Find the distance so the system is an equilibrium?



# P12 - 4.1 - Torque Equilibrium HMK

*Find the Tension in the string. Ignore the mass of the pole.*



*What is the force on the wall by the pole?*