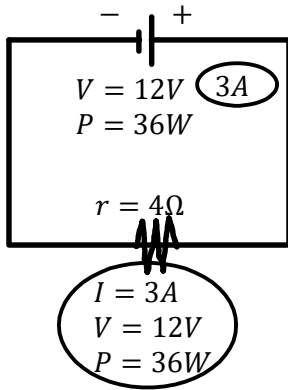


P12 - 9.1 - V=IR P=IV Q=I/T Series Parallel Circuits Notes

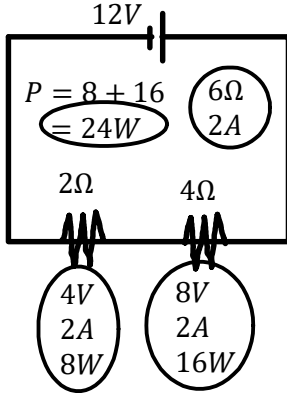


$V = IR$
 $I = \frac{12}{4}$
 $I = 3A$
 $P = IV$
 $P = 3(12)$
 $P = 36W$
 $P = I^2R$
 $P = 3^2(4)$
 $P = 36W$

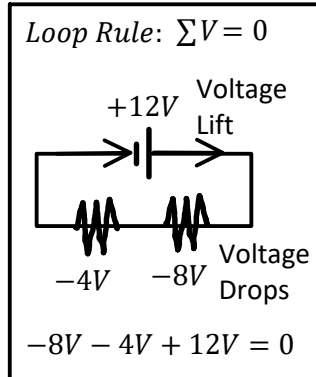
$I = \frac{Q}{t}$
 $Q = It$
 $Q = 3(1)$
 $Q = 3C$
 How many electrons in 1s?
 $3C \times \frac{6.24E18e^-}{1C} = 1.87E19e^-$
 $1e^- \times 1.9 \times 10^{-19}C$

Check: Ohm's Law/Series/Parallel/Loop/Junction Rules

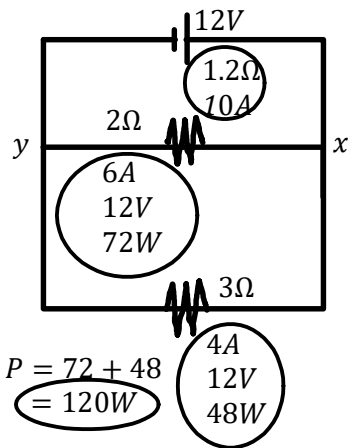
Series $I_T = I_1 = I_2$



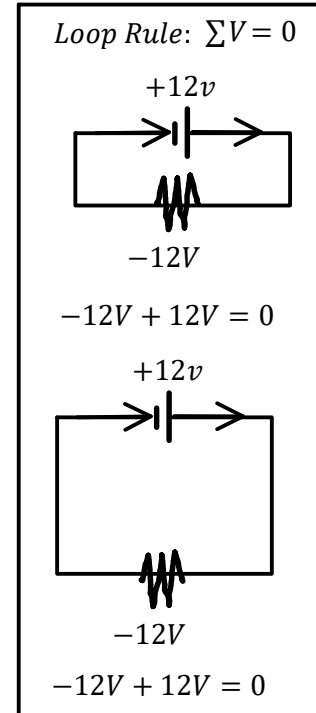
R_T 1st 2Ω 4Ω
 $R_T = R_1 + R_2$
 $R_T = 2 + 4$
 $R_T = 6\Omega$
 Total
 $V = IR$
 $I = \frac{12}{6}$
 $I = 2C$
 $V = IR$
 $V = 2(2)$
 $V = 4V$
 $V = IR$
 $V = 2(4)$
 $V = 8V$
 Check $V_T = V_1 + V_2$
 $12 = 4 + 8$ ✓
 $P = IV$
 $P = 2(4)$
 $P = 8W$
 $P = IV$
 $P = 2(8)$
 $P = 16W$



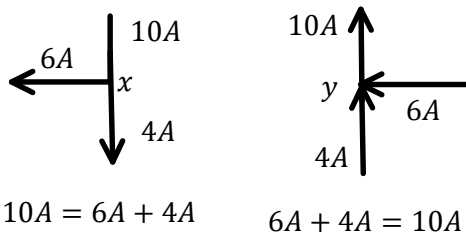
Parallel $V_T = V_1 = V_2$



R_T 1st 2Ω 3Ω
 $\frac{1}{R_T} = \frac{1}{R_1} + \frac{1}{R_2}$
 $\frac{1}{R_T} = \frac{1}{2} + \frac{1}{3}$
 $\frac{1}{R_T} = \frac{5}{6}$
 $R_T = 1.2\Omega$
 $V = IR$
 $I = \frac{12}{1.2}$
 $I = 10A$
 $V = IR$
 $I = \frac{12}{2}$
 $I = 6A$
 $V = IR$
 $I = \frac{12}{3}$
 $I = 4A$
 Check $I_T = I_1 + I_2$
 $10 = 6 + 4$ ✓
 $P = IV$
 $P = 6(12)$
 $P = 72W$
 $P = IV$
 $P = 4(12)$
 $P = 48W$



Junction Rule: $I_A + I_B + \dots + I_n = I_C$



*Two Resistors!

$R_T^* = \frac{R_1 R_2}{R_1 + R_2}$
 $R_T^* = \frac{2(3)}{2+3}$
 $R_T^* = 1.2\Omega$

P12 - 9.2 - Redraw Circuits Notes

Parallel in Series

1st Redraw

2 $R_T = 5 + 1.2$
 $R_T = 6.2\Omega$

3 $V = IR$
 $I = \frac{V}{R}$
 $I = \frac{12}{6.2}$
 $I = 1.94A$

4 $V = IR$
 $V = 1.94(5)$
 $V = 9.68V$
 $V = IR$
 $V = 1.94(1.2)$
 $V = 2.32V$

5 $V = IR$
 $I = \frac{V}{R}$
 $I = \frac{2.32}{2}$
 $I = 1.16A$
 $V = IR$
 $I = \frac{V}{R}$
 $I = \frac{2.32}{3}$
 $I = 0.77A$

$R_T = 1.2\Omega$
 $V_T = V_1 = V_2$
 $I_T = I_1 = I_2$

Check
 $V_T = V_1 + V_2$
 $12 = 2.32 + 9.68$ ✓

Parallel in Series

Parallel/Series
 $\frac{1}{R_T} = \frac{1}{R_1} + \frac{1}{R_2}$
 $R_T = R_1 + R_2$

Total
 $V = IR$

Parallel
 $V_T = V_1 = V_2$
 $I_T = I_1 + I_2$

Series
 $I_T = I_1 = I_2$
 $V_T = V_1 + V_2$

Series in Parallel

1st Redraw

2 $R_T^* = \frac{R_1 R_2}{R_1 + R_2}$
 $R_T^* = \frac{2(3)}{2+3}$
 $R_T^* = 1.2\Omega$

3 $V = IR$
 $I = \frac{V}{R}$
 $I = \frac{12}{1.2}$
 $I = 10A$

4 $V = IR$
 $I = \frac{V}{R}$
 $I = \frac{12}{3}$
 $I = 4A$
 $V_T = V_1 = V_2$

5 $V = IR$
 $V = 4(1)$
 $V = 4V$
 $V = IR$
 $V = 4(2)$
 $V = 8V$
 $I_T = I_1 = I_2$
 $I_T = 4A$
 $I_T = 8V$
 $I = 6A$

Check
 $V_T = V_1 + V_2$
 $12 = 4 + 8$ ✓

Series in Parallel

Series/Parallel
 $R_T = R_1 + R_2$
 $R_T^* = \frac{R_1 R_2}{R_1 + R_2}$

Total
 $V = IR$

Series
 $I_T = I_1 = I_2$
 $V_T = V_1 + V_2$

Parallel
 $V_T = V_1 = V_2$
 $I_T = I_1 + I_2$

P12 - 9.3 - Add R Bulb/Switch Circuits Notes

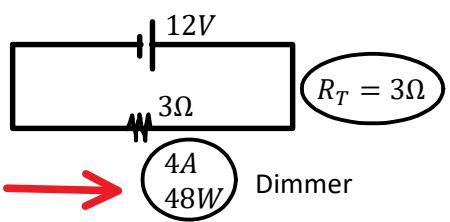
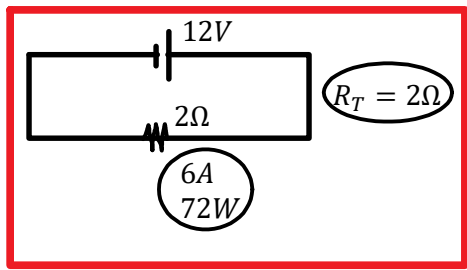
$V = IR$ $P = IV$

Series

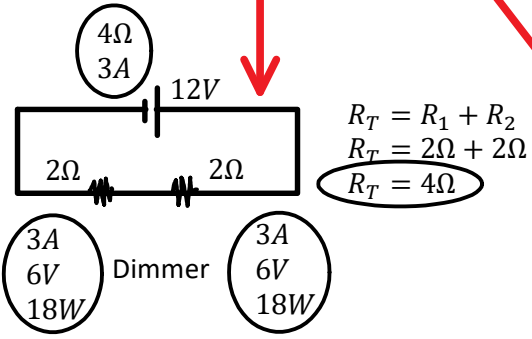
$I_T = I_1 = I_2 = I_3 \dots$
 $V_T = V_1 + V_2 + V_3 \dots$
 $R_T = R_1 + R_2 + R_3 \dots$

Parallel

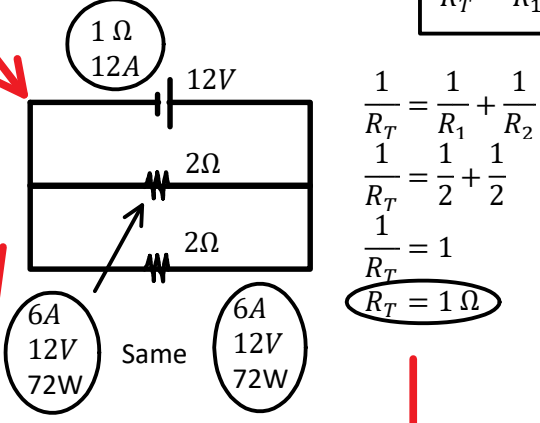
$V_T = V_1 = V_2 = V_3 \dots$
 $I_T = I_1 + I_2 + I_3 \dots$
 $\frac{1}{R_T} = \frac{1}{R_1} + \frac{1}{R_2} + \frac{1}{R_3} \dots$



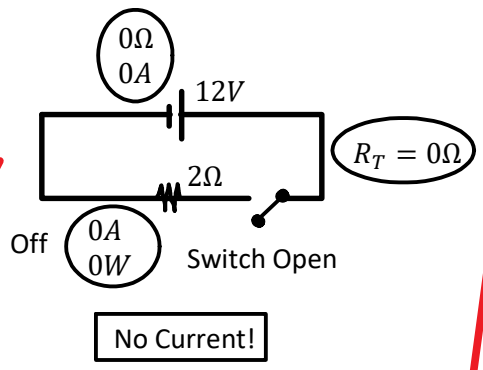
Inc R → I Dec, P Dec



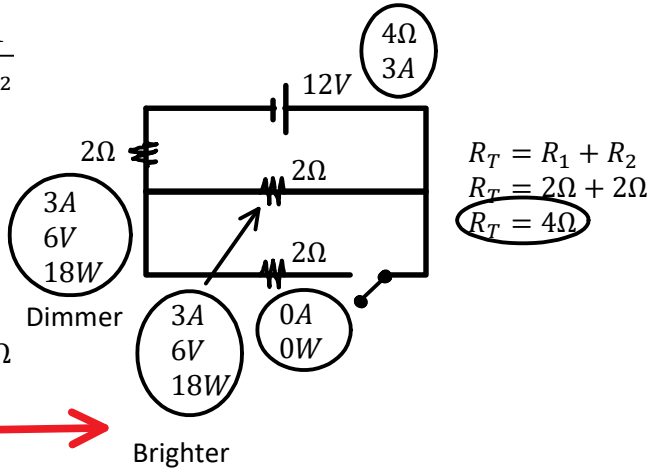
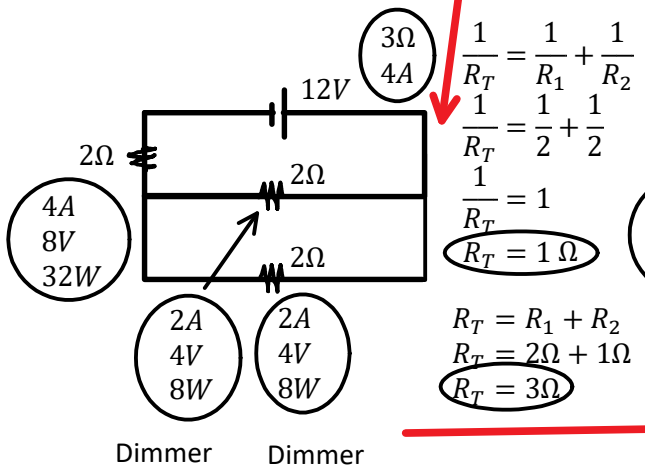
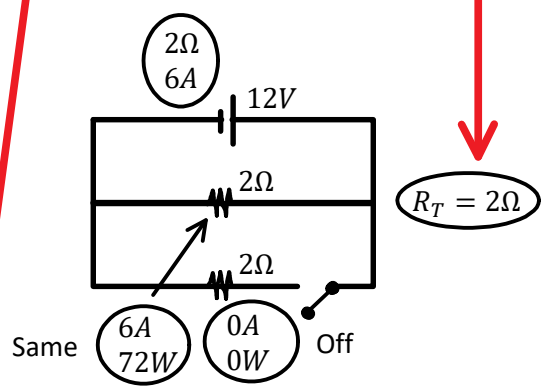
Add resistors in Series
 → R_T increases



Add resistors in Parallel
 → R_T decreases

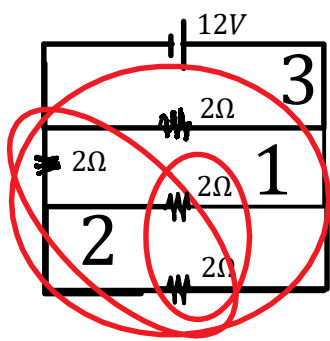


No Current!

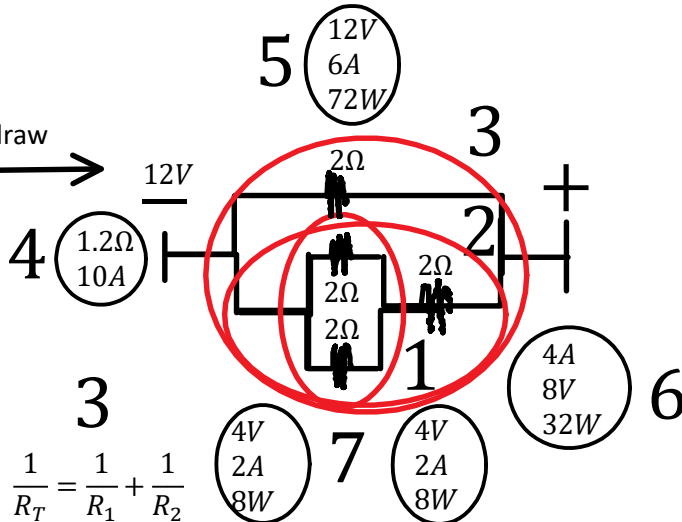


Brighter

P12 - 9.3 - Add R Bulb/Switch Circuits Notes



Redraw →



1

$$\frac{1}{R_T} = \frac{1}{R_1} + \frac{1}{R_2}$$

$$\frac{1}{R_T} = \frac{1}{2} + \frac{1}{2}$$

$$\frac{1}{R_T} = 1$$

$$R_T = 1\Omega$$

2

$$R_T = R_1 + R_2$$

$$R_T = 2\Omega + 1\Omega$$

$$R_T = 3\Omega$$

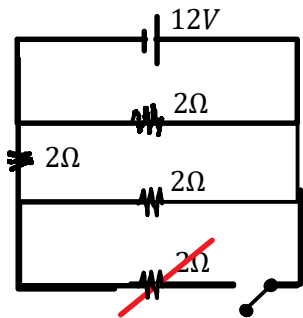
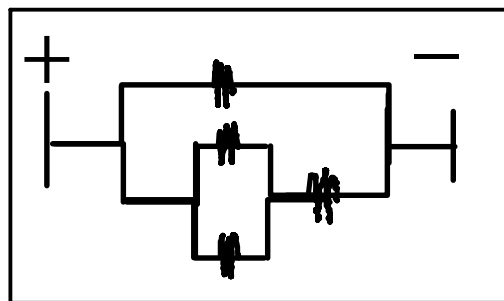
3

$$\frac{1}{R_T} = \frac{1}{R_1} + \frac{1}{R_2}$$

$$\frac{1}{R_T} = \frac{1}{2} + \frac{1}{3}$$

$$\frac{1}{R_T} = \frac{5}{6}$$

$$R_T = 1.2\Omega$$



1

$$R_T = R_1 + R_2$$

$$R_T = 2\Omega + 2\Omega$$

$$R_T = 4\Omega$$

$$\frac{1}{R_T} = \frac{1}{R_1} + \frac{1}{R_2}$$

$$\frac{1}{R_T} = \frac{1}{2} + \frac{1}{4}$$

$$\frac{1}{R_T} = \frac{3}{4}$$

$$R_T = 1.33\Omega$$

